


Side Length

Sheet 1

Example :



Perimeter = 16 yd

Perimeter = 4 x Side

16 yd = 4 x Side

$$\frac{16}{4} = \text{Side}$$

Side = **4 yd**

Ans = 4 yd

Find the side length of each square.


1)



Perimeter = 60 yd

Side Length =

2)



3)



Perimeter = 20 in

Side Length =


4)



Perimeter = 40 ft


Side Length =

7)




Perimeter = 32 in

Side Length =



Perimeter = 24 yd

Side Length =



Perimeter = 48 ft

Side Length =

PREVIEW

Access the largest collection of
worksheets for just **\$19.95** per year!

Members, please
log in to
download this
worksheet.

Log in

Not a member?
Please sign up to
gain complete
access.


Sign up

www.mathworksheets4kids.com

Side Length

Sheet 1

Example :



Perimeter = 16 yd

Perimeter = 4 x Side

16 yd = 4 x Side

$\frac{16}{4} = \text{Side}$

Side = 4 yd

Ans = 4 yd

Find the side length of each square.


1)



Perimeter = 60 yd

Side Length = 15 yd

2)



Perimeter = 20 in

Side Length = 5 in


4)



Perimeter = 40 ft


Side Length = 10 ft

7)




Perimeter = 32 in

Side Length = 8 in



Perimeter = 24 yd

Side Length = 6 yd



Perimeter = 48 ft

Side Length = 12 ft

PREVIEW

Access the largest collection of worksheets for just \$19.95 per year!

Members, please log in to download this worksheet.

Log in

Not a member? Please sign up to gain complete access.

Sign up

www.mathworksheets4kids.com