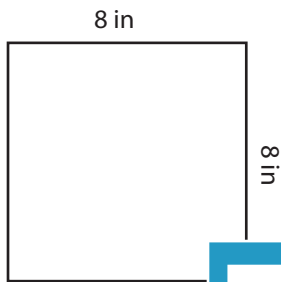


Square - Area

ES1

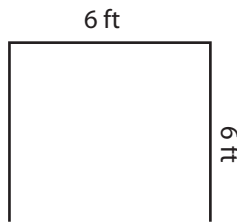
Find the area of each square.

1)




Area =

2)




3)



Area =

4)



Area =

Access the largest collection of worksheets for just **\$19.95** per year!

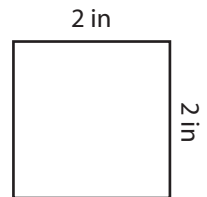
Members, please log in to download this worksheet.

Log in

Not a member? Please sign up to gain complete access.

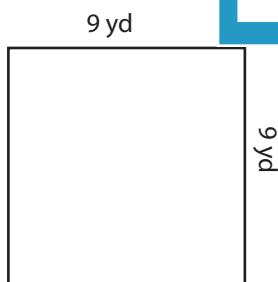
Sign up

www.mathworksheets4kids.com




Area =

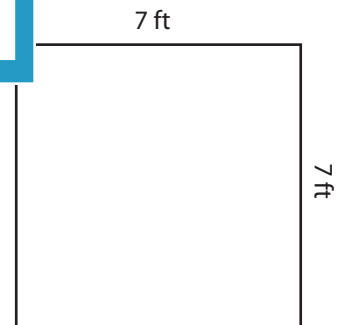
7)



Area =



Area =



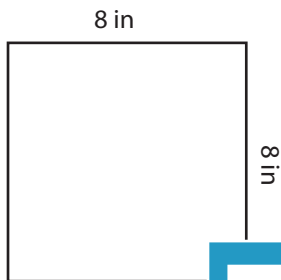
Area =

Square - Area

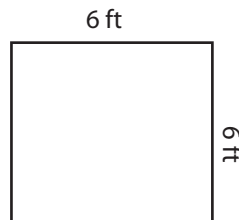
ES1

Find the area of each square.


1)

Area = **64 in²**

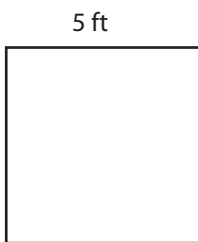
2)



3)

Area = **144 yd²**

4)

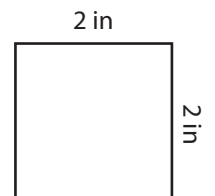
Area = **25 ft²**

Access the largest collection of
worksheets for just **\$19.95** per year!

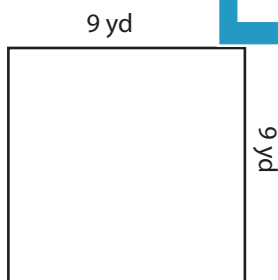

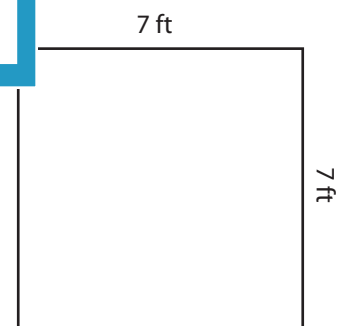
Members, please
log in to
download this
worksheet.

Log in

Not a member?
Please sign up to
gain complete
access.

Sign upwww.mathworksheets4kids.comArea = **4 in²**

7)

Area = **81 yd²**Area = **9 in²**Area = **49 ft²**