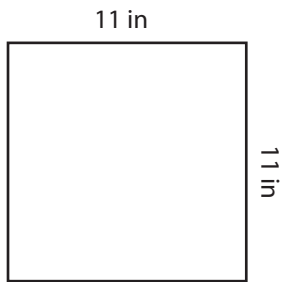


**Square - Perimeter**

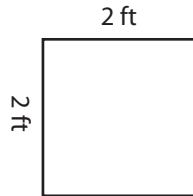
ES1

Find the perimeter of each square.

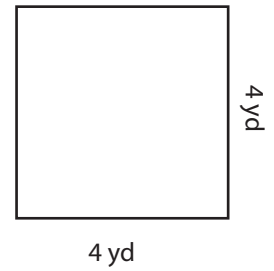
1)

Perimeter = 

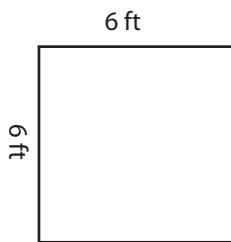
2)

Perimeter = 

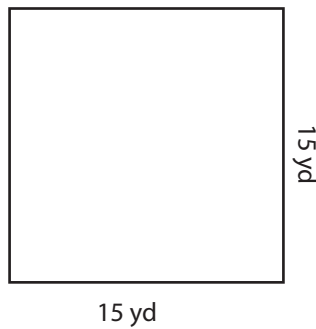
3)

Perimeter = 

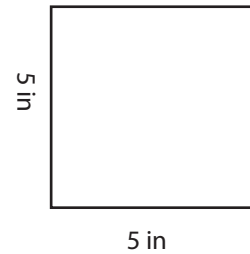
4)

Perimeter = 

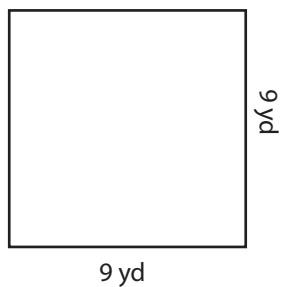
5)

Perimeter = 

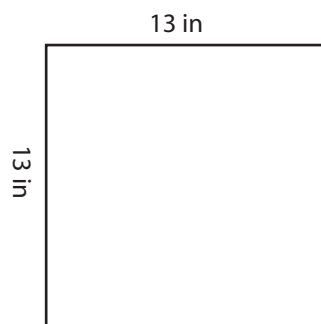
6)

Perimeter = 

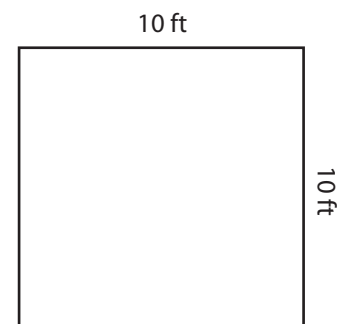
7)

Perimeter = 

8)

Perimeter = 

9)

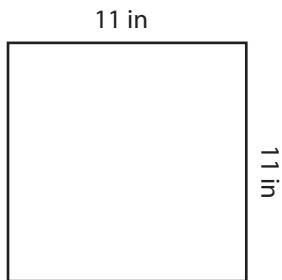
Perimeter =

**Square - Perimeter**

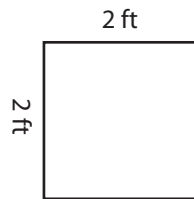
ES1

Find the perimeter of each square.

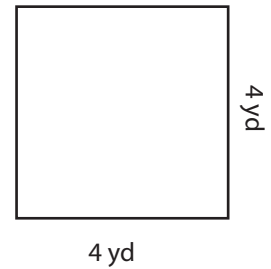
1)

Perimeter = **44 in**

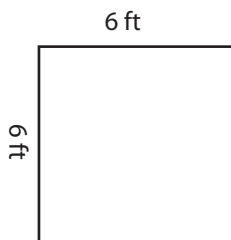
2)

Perimeter = **8 ft**

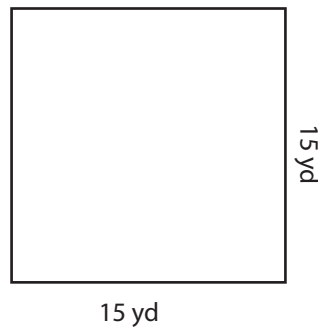
3)

Perimeter = **16 yd**

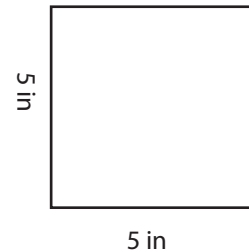
4)

Perimeter = **24 ft**

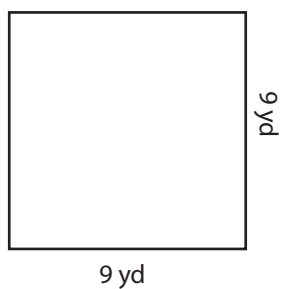
5)

Perimeter = **60 yd**

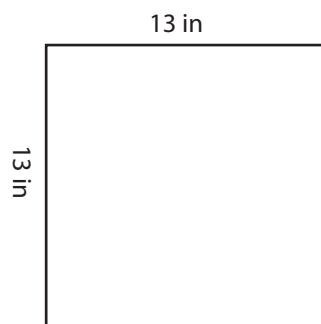
6)

Perimeter = **20 in**

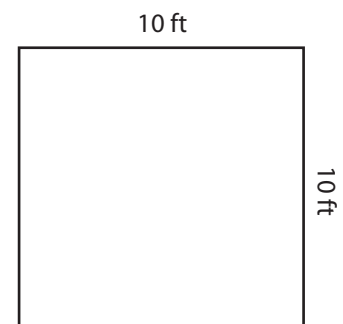
7)

Perimeter = **36 yd**

8)

Perimeter = **52 in**

9)

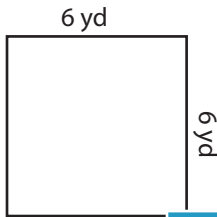
Perimeter = **40 ft**

**Square - Perimeter**

ES2

Find the perimeter of each square.

1)



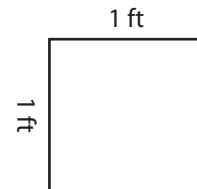
Perimeter=

2)



Perimeter=

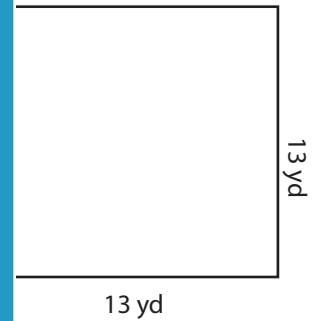
3)



4)




Perimeter=




Perimeter=

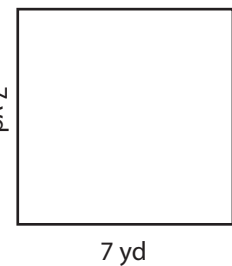
7)



Perimeter=



Perimeter=



Perimeter=

**PREVIEW**

Access the largest collection of worksheets for just **\$19.95** per year!

Members, please log in to download this worksheet.

Log in

Not a member? Please sign up to gain complete access.

Sign up

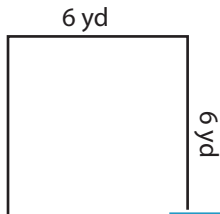
[www.mathworksheets4kids.com](http://www.mathworksheets4kids.com)

## Square - Perimeter

ES2

Find the perimeter of each square.

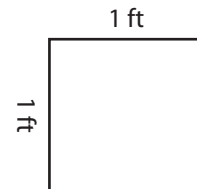
1)

Perimeter= **24 y**

2)

Perimeter= **4 ft**

3)



4)

Perimeter= **36**

Access the largest collection of  
worksheets for just **\$19.95** per year!

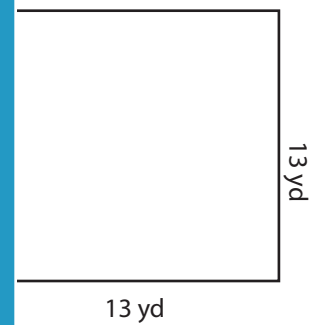
Members, please  
log in to  
download this  
worksheet.

Log in

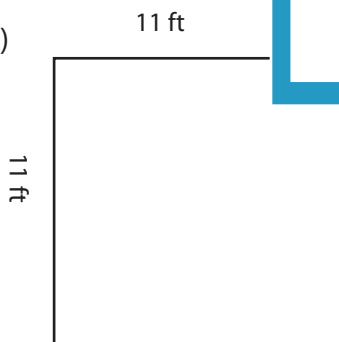

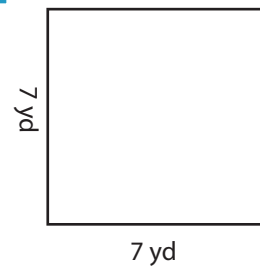
Not a member?  
Please sign up to  
gain complete  
access.

Sign up

[www.mathworksheets4kids.com](http://www.mathworksheets4kids.com)

Perimeter= **52 yd**

7)

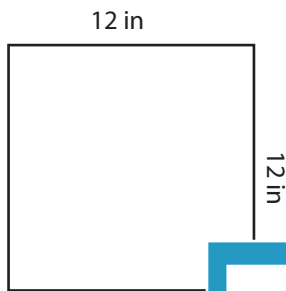
Perimeter= **44 ft**Perimeter= **56 in**Perimeter= **28 yd**

**Square - Perimeter**

ES3

Find the perimeter of each square.

1)



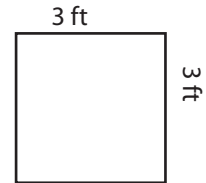
Perimeter =

2)



Perimeter =

3)



4)



Perimeter =

2 yd



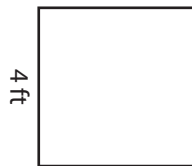
Perimeter =

7)



Perimeter =

4 ft



Perimeter =

5 in



Perimeter =

**PREVIEW**

Access the largest collection of worksheets for just **\$19.95** per year!

Members, please log in to download this worksheet.

Log in

Not a member? Please sign up to gain complete access.

Sign up

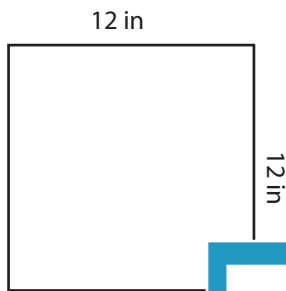
[www.mathworksheets4kids.com](http://www.mathworksheets4kids.com)

## Square - Perimeter

ES3

Find the perimeter of each square.

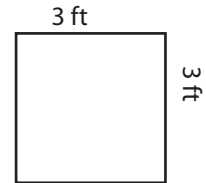
1)

Perimeter = **48**

2)

Perimeter = **36**

3)

Perimeter = **12 ft**

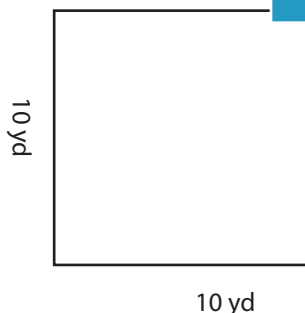
4)

Perimeter = **28 ft**

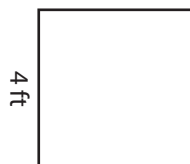
2 yd

Perimeter = **8 yd**


7)

Perimeter = **40 yd**

4 ft

Perimeter = **16 ft**

5 in

Perimeter = **20 in****PREVIEW**

Access the largest collection of  
worksheets for just **\$19.95** per year!

Members, please  
log in to  
download this  
worksheet.

**Log in**

Not a member?  
Please sign up to  
gain complete  
access.

**Sign up**

[www.mathworksheets4kids.com](http://www.mathworksheets4kids.com)