


Name : _____

Perimeter of a Rectangle

T1S1

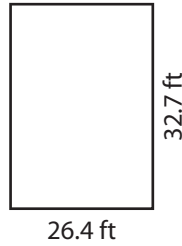
Find the perimeter of each rectangle.

1)




Perimeter =

2)




Perimeter =

3)



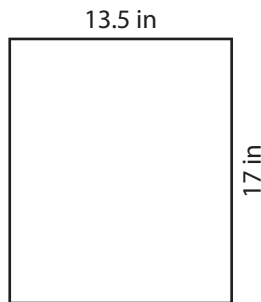
Perimeter =

4)



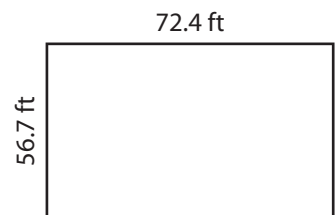
Perimeter =

5)



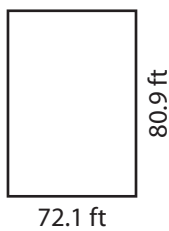
Perimeter =

6)



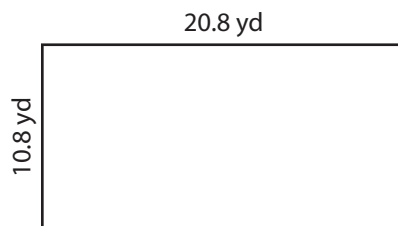
Perimeter =

7)



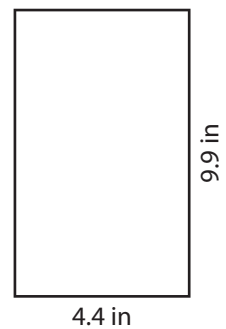
Perimeter =

8)



Perimeter =

9)



Perimeter =

Name : _____


Answer key

Perimeter of a Rectangle

T1S1

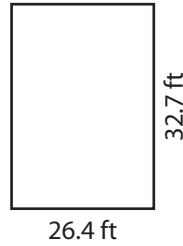
Find the perimeter of each rectangle.

1)



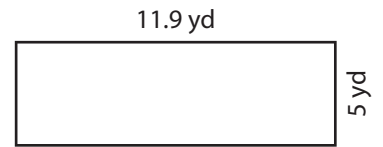
Perimeter = **226 in**

2)




Perimeter = **118.2 ft**

3)



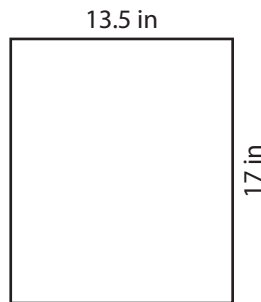
Perimeter = **33.8 yd**

4)



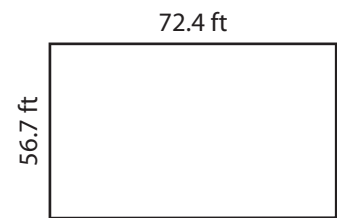
Perimeter = **11.6 yd**

5)



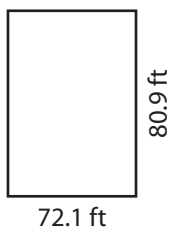
Perimeter = **61 in**

6)



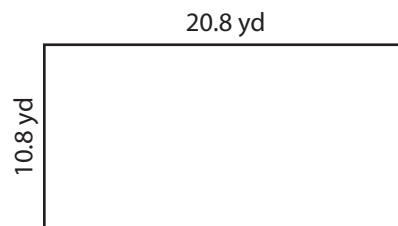
Perimeter = **258.2 ft**

7)



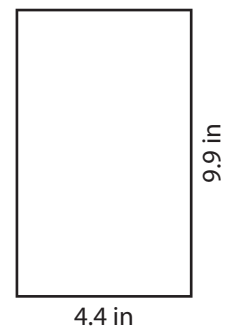
Perimeter = **306 ft**

8)



Perimeter = **63.2 yd**

9)



Perimeter = **28.6 in**