

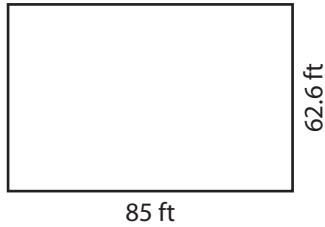
Name : _____

T1S2

Perimeter of a Rectangle

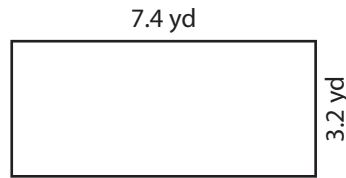
Find the perimeter of each rectangle.

1)



Perimeter =

2)

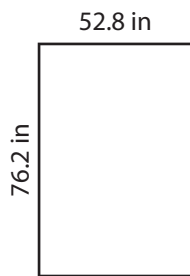


Perimeter =

3)



4)




Perimeter =

Gain complete access to the largest collection of worksheets in all subjects!

Members, please log in to download this worksheet.

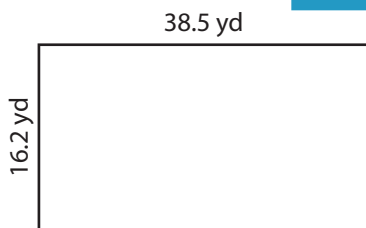
Not a member? Please sign up to gain complete access.

www.mathworksheets4kids.com

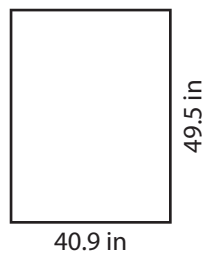


Perimeter =

7)



Perimeter =



Perimeter =



Perimeter =

Name : _____

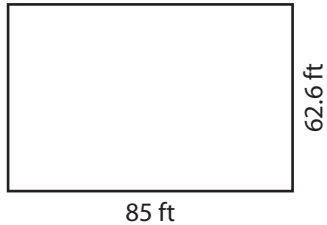
Answer key

T1S2

Perimeter of a Rectangle

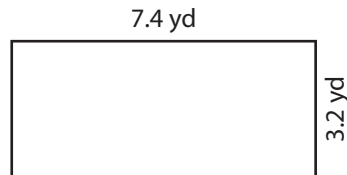
Find the perimeter of each rectangle.

1)



Perimeter = **295.2**

2)

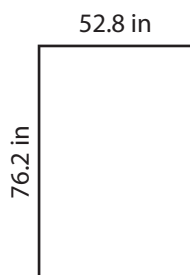


Perimeter = **105 in**

3)



4)



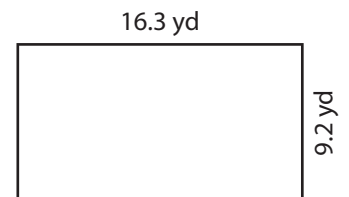
Perimeter = **258 in**

Gain complete access to the largest collection of worksheets in all subjects!

Members, please log in to download this worksheet.

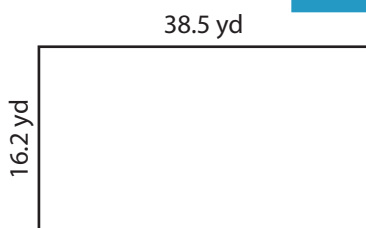
Not a member? Please sign up to gain complete access.

www.mathworksheets4kids.com

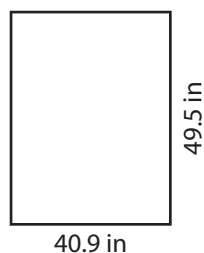


Perimeter = **51 yd**

7)



Perimeter = **109.4 yd**



Perimeter = **180.8 in**



Perimeter = **21.4 ft**