

Name : _____

T1S3

Perimeter of a Rectangle

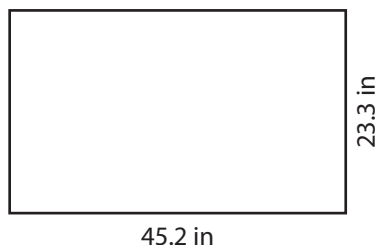
Find the perimeter of each rectangle.

1)



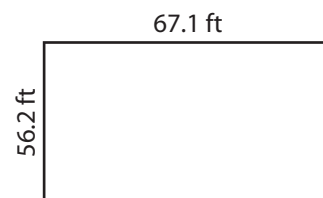
Perimeter =

2)



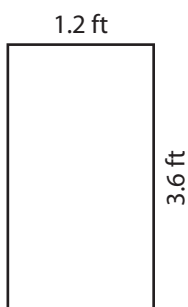
45.2 in

3)



Perimeter =

4)



Perimeter =

PREVIEW
Gain complete access to the largest collection of worksheets in all subjects!

Members, please log in to download this worksheet.

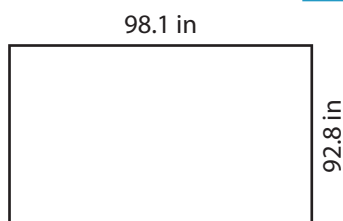
Not a member? Please sign up to gain complete access.

www.mathworksheets4kids.com




Perimeter =

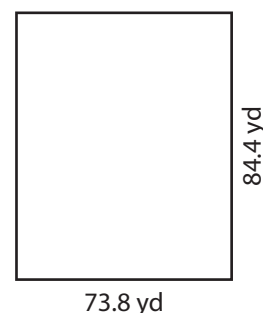
7)



Perimeter =



Perimeter =



Perimeter =

Name : _____

Answer key

T1S3

Perimeter of a Rectangle

Find the perimeter of each rectangle.

1)



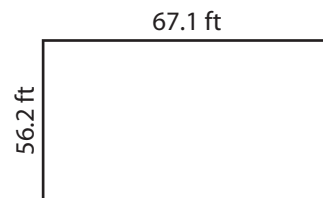
Perimeter = **141.6**

2)



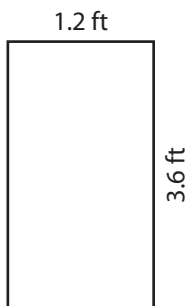
45.2 in

3)



Perimeter = **246.6 ft**

4)



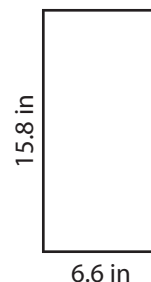
Perimeter = **9.6 ft**

Gain complete access to the largest collection of worksheets in all subjects!

Members, please log in to download this worksheet.


Not a member? Please sign up to gain complete access.

www.mathworksheets4kids.com

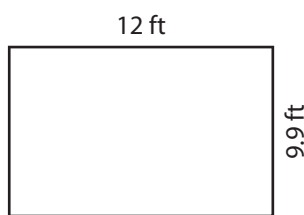


Perimeter = **44.8 in**

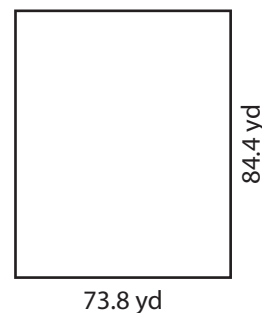
7)



Perimeter = **381.8 in**



Perimeter = **43.8 ft**



Perimeter = **316.4 yd**