


Name : _____

T1S4

Perimeter of a Rectangle

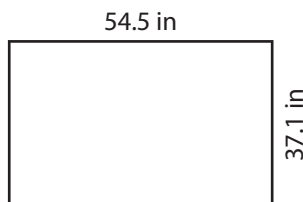
Find the perimeter of each rectangle.

1)



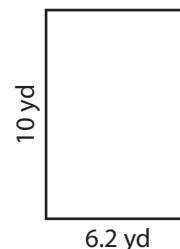
Perimeter =

2)



Perimeter =

3)



4)



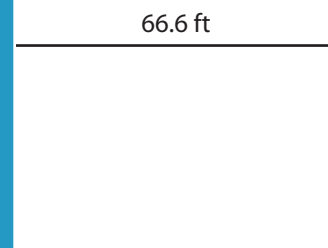
Perimeter =

Gain complete access to the largest collection of worksheets in all subjects!

Members, please log in to download this worksheet.

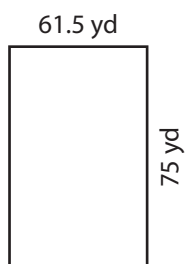
Not a member? Please sign up to gain complete access.

www.mathworksheets4kids.com




Perimeter =

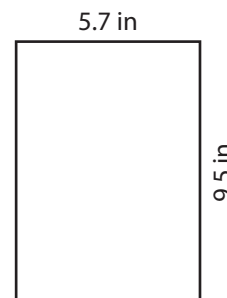
7)



Perimeter =



Perimeter =



Perimeter =

Name : _____


Answer key

T1S4

Perimeter of a Rectangle

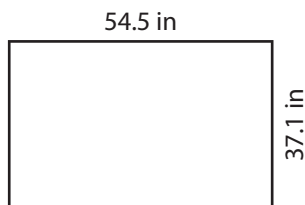
Find the perimeter of each rectangle.

1)



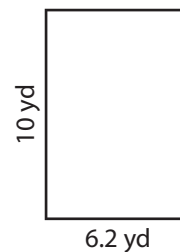
Perimeter = **341.8**

2)



Perimeter = **32.4 yd**

3)



4)



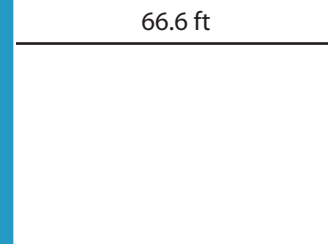
Perimeter = **53.2 i**

Gain complete access to the largest collection of worksheets in all subjects!

Members, please log in to download this worksheet.

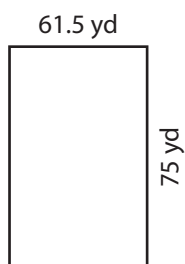
Not a member? Please sign up to gain complete access.

www.mathworksheets4kids.com




Perimeter = **220 ft**

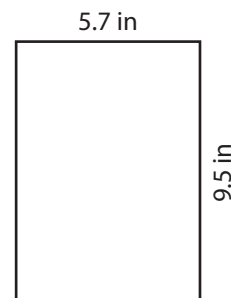
7)



Perimeter = **273 yd**



Perimeter = **142.8 ft**



Perimeter = **30.4 in**