

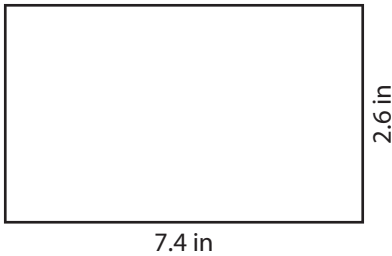
Name : _____

T1S5

Perimeter of a Rectangle

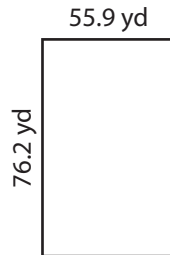
Find the perimeter of each rectangle.

1)



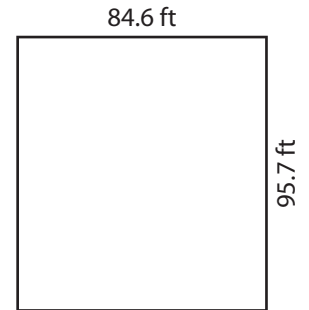
Perimeter =

2)

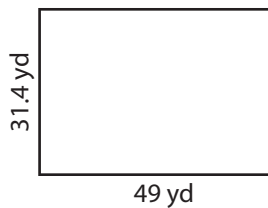


Perimeter =

3)



4)



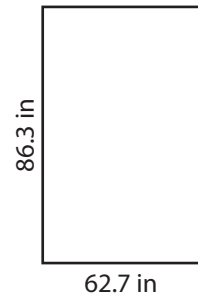
Perimeter =

Gain complete access to the largest collection of worksheets in all subjects!

Members, please log in to download this worksheet.


Not a member? Please sign up to gain complete access.

www.mathworksheets4kids.com

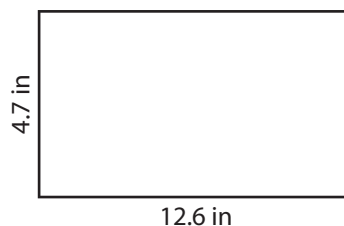


Perimeter =


7)



Perimeter =



Perimeter =



Perimeter =

Name : _____

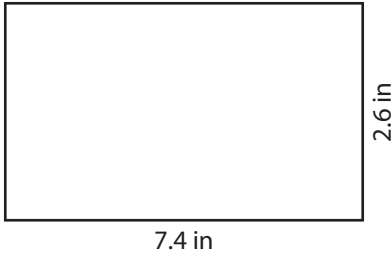
Answer key

T155

Perimeter of a Rectangle

Find the perimeter of each rectangle.

1)



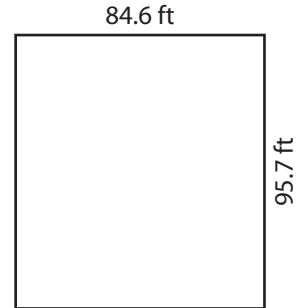
Perimeter = **20 in**

2)

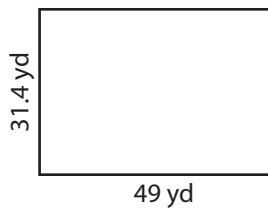


Perimeter = **360.6 ft**

3)



4)



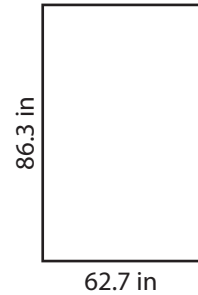
Perimeter = **160.8**

Gain complete access to the largest collection of worksheets in all subjects!

Members, please log in to download this worksheet.


Not a member? Please sign up to gain complete access.

www.mathworksheets4kids.com

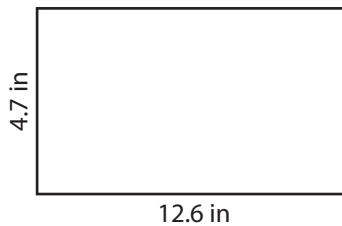


Perimeter = **298 in**


7)



Perimeter = **78 ft**



Perimeter = **34.6 in**



Perimeter = **84.2 yd**