

Name : _____

Perimeter of a Rectangle

Sheet 2

A) Find the diagonal of each rectangle. Round your answer to the nearest tenth.

1) perimeter = 102 ft, width = 16 ft

Diagonal = _____

2) perimeter = 19.1 yd, length = 6.3 yd

Diagonal = _____

3) perimeter = 78 in, length = 22 in

Diagonal = _____

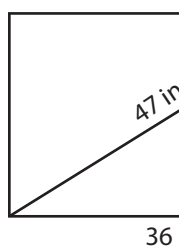
4) perimeter = 188.7 ft, width = 39 ft

Diagonal = _____

B) Find the perimeter

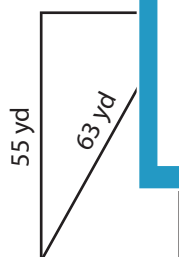
nearest tenth.

1)



Perimeter = _____

3)



Perimeter = _____

Perimeter = _____

C) Find the perimeter of the rectangle, if the diagonal measures 70.1 yards and its length is 68 yards. Round your answer to the nearest tenth.

PREVIEW

Gain complete access to the largest collection of worksheets in all subjects!

Members, please log in to download this worksheet.

Not a member? Please sign up to gain complete access.

www.mathworksheets4kids.com

Perimeter of a Rectangle

A) Find the diagonal of each rectangle. Round your answer to the nearest tenth.

1) perimeter = 102 ft, width = 16 ft

Diagonal = 38.5 ft

2) perimeter = 19.1 yd, length = 6.3 yd

Diagonal = 7.1 yd

3) perimeter = 78 in, length = 22 in

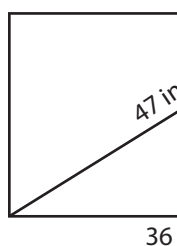
Diagonal = 27.8 in

4) perimeter = 188.7 ft, width = 39 ft

Diagonal = 67.7 ft

B) Find the perimeter of each rectangle. Round your answer to the nearest tenth.

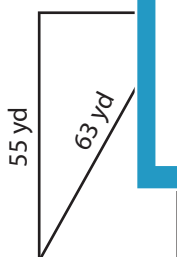
1)



Perimeter = _____

40.1 ft

3)



Perimeter = 171.4 yd

Perimeter = 20 in

C) Find the perimeter of the rectangle, if the diagonal measures 70.1 yards and its length is 68 yards. Round your answer to the nearest tenth.

170.1 yards

PREVIEW

Gain complete access to the largest collection of worksheets in all subjects!

Members, please log in to download this worksheet.

Not a member? Please sign up to gain complete access.

www.mathworksheets4kids.com