

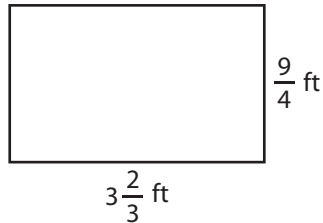
Name : _____

T1S3

Perimeter of a Rectangle

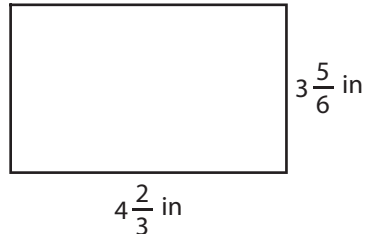
Find the perimeter of each rectangle.

1)



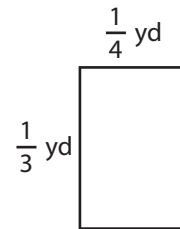
Perimeter =

2)

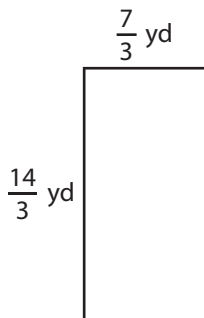


Perimeter =

3)



4)



Perimeter =

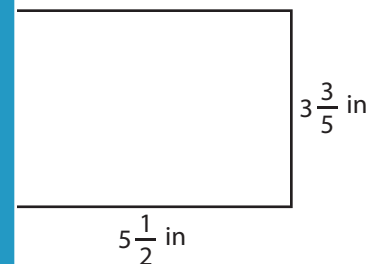
PREVIEW

Gain complete access to the largest collection of worksheets in all subjects!

Members, please log in to download this worksheet.

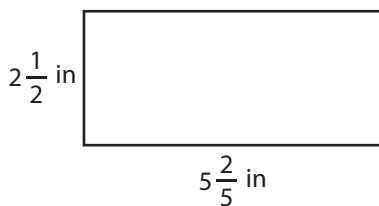
Not a member? Please sign up to gain complete access.

www.mathworksheets4kids.com

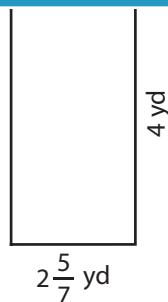


Perimeter =

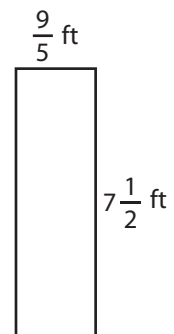
7)



Perimeter =



Perimeter =



Perimeter =

Name : _____

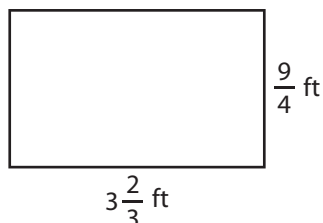
Answer key

Perimeter of a Rectangle

T1S3

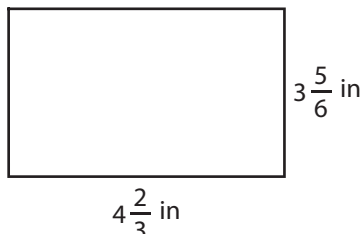
Find the perimeter of each rectangle.

1)

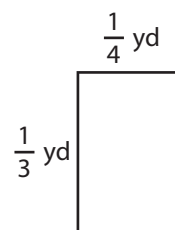


Perimeter = $\frac{71}{6}$ or 11

2)

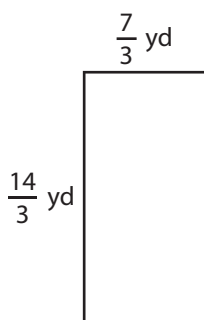


3)



Perimeter = $\frac{7}{6}$ or $1\frac{1}{6}$ yd

4)



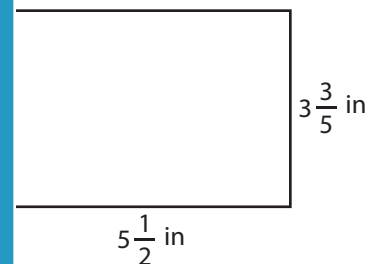
Perimeter = 14 yd

PREVIEW
Gain complete access to the largest collection of worksheets in all subjects!

Members, please log in to download this worksheet.

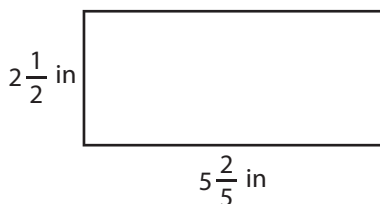
Not a member? Please sign up to gain complete access.

www.mathworksheets4kids.com

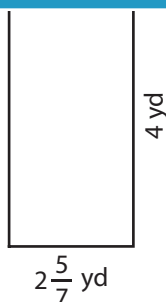


Perimeter = $\frac{91}{5}$ or $18\frac{1}{5}$ in

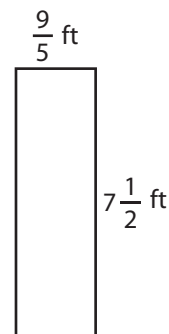
7)



Perimeter = $\frac{79}{5}$ or $15\frac{4}{5}$ in



Perimeter = $\frac{94}{7}$ or $13\frac{3}{7}$ yd



Perimeter = $\frac{93}{5}$ or $18\frac{3}{5}$ ft