

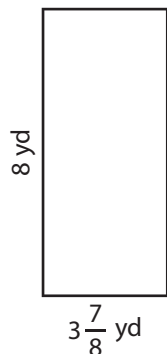
Name : _____

Perimeter of a Rectangle

T1S4


Find the perimeter of each rectangle.

1)

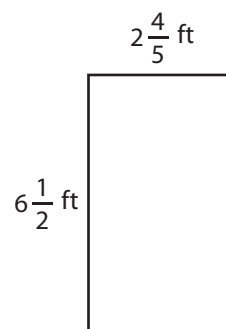


Perimeter =

2)

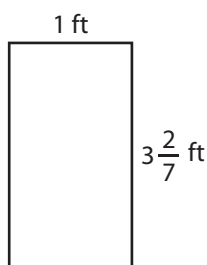


3)



Perimeter =

4)



Perimeter =

PREVIEW


Gain complete access to the largest collection of worksheets in all subjects!

Members, please log in to download this worksheet.

Not a member? Please sign up to gain complete access.

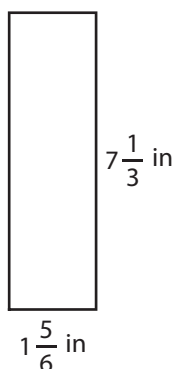
www.mathworksheets4kids.com

$\frac{7}{3}$ in



Perimeter =

7)

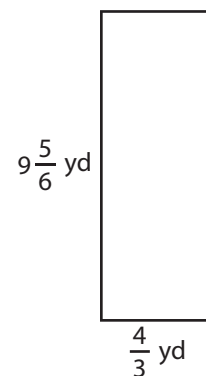


Perimeter =

$\frac{7}{2}$ ft



Perimeter =



Perimeter =

Name : _____

Answer key

Perimeter of a Rectangle

T1S4

Find the perimeter of each rectangle.

1)

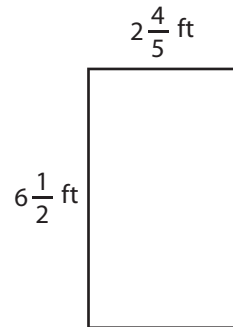


Perimeter = $\frac{95}{4}$ or 23

2)

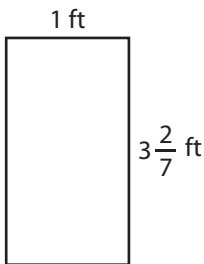


3)



Perimeter = $\frac{93}{5}$ or $18\frac{3}{5}$ ft

4)



Perimeter = $\frac{60}{7}$ or $8\frac{4}{7}$

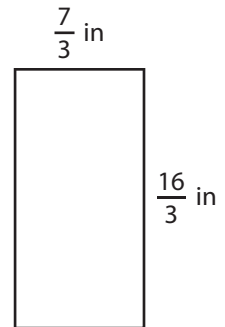
PREVIEW

Gain complete access to the largest collection of worksheets in all subjects!

Members, please log in to download this worksheet.

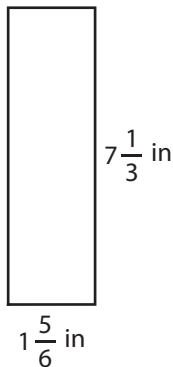
Not a member? Please sign up to gain complete access.

www.mathworksheets4kids.com

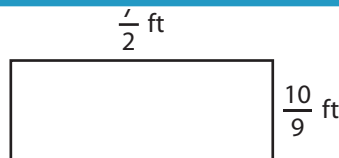


Perimeter = $\frac{46}{3}$ or $15\frac{1}{3}$ in

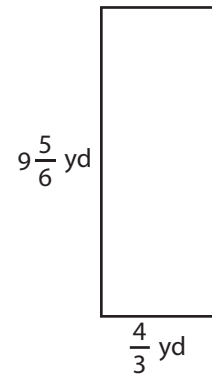
7)



Perimeter = $\frac{55}{3}$ or $18\frac{1}{3}$ in



Perimeter = $\frac{83}{9}$ or $9\frac{2}{9}$ ft



Perimeter = $\frac{67}{3}$ or $22\frac{1}{3}$ yd