

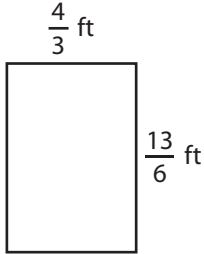
Name : _____

T1S5

Perimeter of a Rectangle

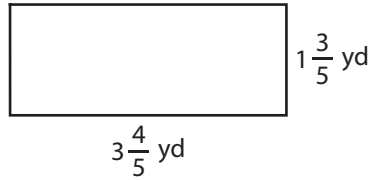
Find the perimeter of each rectangle.

1)



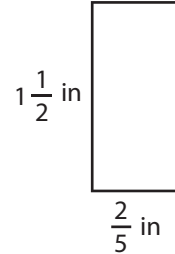
Perimeter =

2)

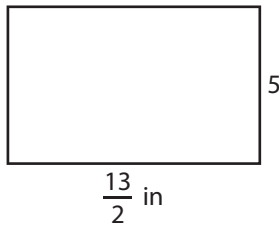


Perimeter =

3)



4)



Perimeter =

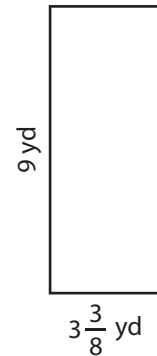
PREVIEW

Gain complete access to the largest collection of worksheets in all subjects!

Members, please log in to download this worksheet.

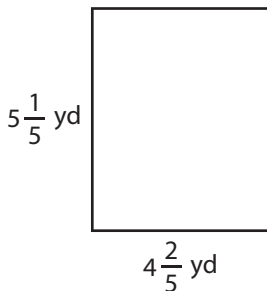
Not a member? Please sign up to gain complete access.

www.mathworksheets4kids.com

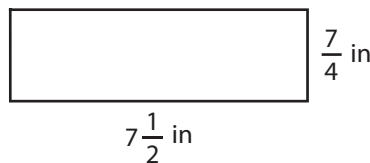


Perimeter =

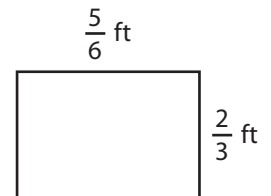
7)



Perimeter =



Perimeter =



Perimeter =

Name : _____

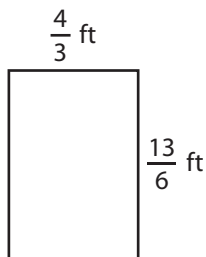
Answer key

T1S5

Perimeter of a Rectangle

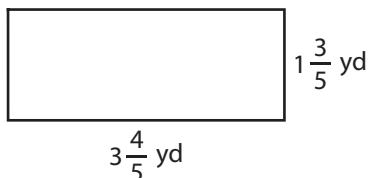
Find the perimeter of each rectangle.

1)



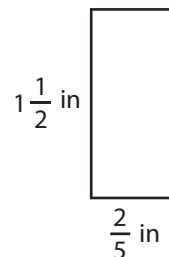
Perimeter = **7 ft**

2)

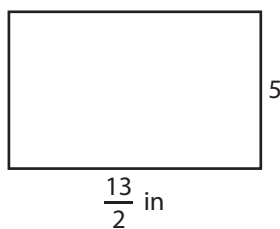


Perimeter = **$\frac{19}{5}$ or $3\frac{4}{5}$ in**

3)



4)



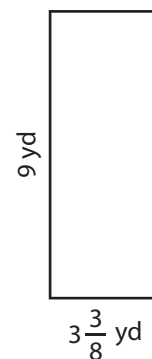
Perimeter = **$\frac{97}{4}$ or 24**

Gain complete access to the largest collection of worksheets in all subjects!

Members, please log in to download this worksheet.

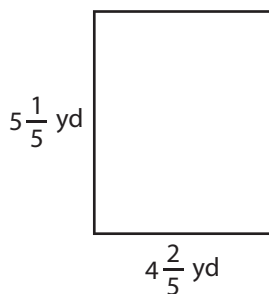
Not a member? Please sign up to gain complete access.

www.mathworksheets4kids.com

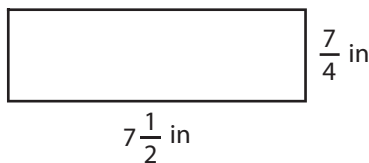


Perimeter = **$\frac{99}{4}$ or $24\frac{3}{4}$ yd**

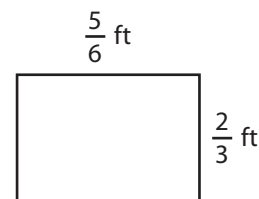
7)



Perimeter = **$\frac{96}{5}$ or $19\frac{1}{5}$ yd**



Perimeter = **$\frac{37}{2}$ or $18\frac{1}{2}$ in**



Perimeter = **3 ft**