

Name : _____

T2S3

Perimeter of a Rectangle

A) Find the perimeter of each rectangle for the given measurements.

1) width = $\frac{1}{2}$ yd, length = $\frac{7}{5}$ yd

Perimeter = _____

2) length = $5\frac{2}{5}$ ft, width = $4\frac{1}{2}$ ft

Perimeter = _____

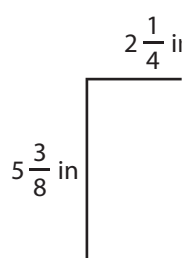
3) length = $\frac{33}{8}$ in, width = $\frac{11}{8}$ in

4) width = $3\frac{3}{4}$ yd, length = $\frac{13}{2}$ yd

Perimeter = _____

B) Find the perimeter

5)



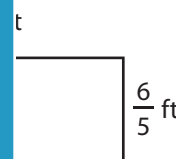
Perimeter = _____

Gain complete access to the largest collection of worksheets in all subjects!

Members, please log in to download this worksheet.

Not a member? Please sign up to gain complete access.

www.mathworksheets4kids.com



7)



Perimeter = _____

Perimeter = _____

9) The width and the length of a rectangle are $\frac{16}{3}$ feet and 6 feet respectively. Find the perimeter of the rectangle.

Perimeter of a Rectangle

A) Find the perimeter of each rectangle for the given measurements.

1) width = $\frac{1}{2}$ yd, length = $\frac{7}{5}$ yd

Perimeter = $\frac{19}{5}$ or $3\frac{4}{5}$ yd

2) length = $5\frac{2}{5}$ ft, width = $4\frac{1}{2}$ ft

Perimeter = $\frac{99}{5}$ or $19\frac{4}{5}$ ft

3) length = $\frac{33}{8}$ in, width = $\frac{11}{8}$ in

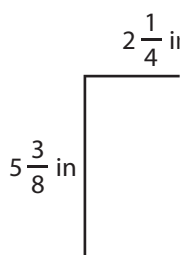
4) width = $3\frac{3}{4}$ yd, length = $\frac{13}{2}$ yd

Perimeter = _____

or $20\frac{1}{2}$ yd

B) Find the perimeter

5)



Perimeter = $\frac{67}{4}$

Gain complete access to the largest collection of worksheets in all subjects!

Members, please log in to download this worksheet.

Not a member? Please sign up to gain complete access.

www.mathworksheets4kids.com

Perimeter = $\frac{67}{4}$

or $19\frac{2}{5}$ ft

7)

Perimeter = _____

Perimeter = $\frac{39}{2}$ or $19\frac{1}{2}$ in

Perimeter = $\frac{77}{6}$ or $12\frac{5}{6}$ yd

9) The width and the length of a rectangle are $\frac{16}{3}$ feet and 6 feet respectively. Find the perimeter of the rectangle.

$\frac{68}{3}$ or $22\frac{2}{3}$ feet