

Name : _____

Perimeter of a Rectangle

T1L1S1

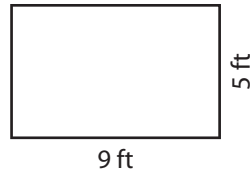
Find the perimeter of each rectangle.

1)



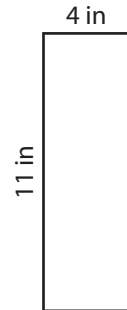
Perimeter =

2)



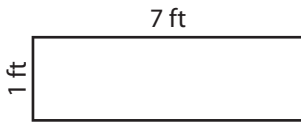
Perimeter =

3)




Perimeter =

4)



Perimeter =

5)



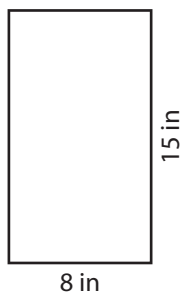
Perimeter =

6)




Perimeter =

7)



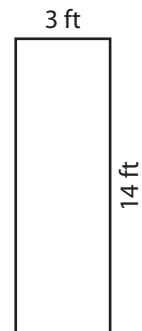
Perimeter =

8)



Perimeter =

9)



Perimeter =

Name : _____

Answer key

Perimeter of a Rectangle

T1L1S1

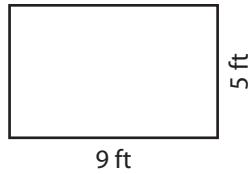
Find the perimeter of each rectangle.

1)



Perimeter = **36 yd**

2)



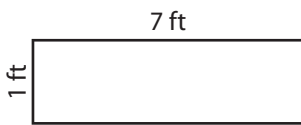
Perimeter = **28 ft**

3)




Perimeter = **30 in**

4)



Perimeter = **16 ft**

5)




Perimeter = **72 in**

6)




Perimeter = **54 yd**

7)



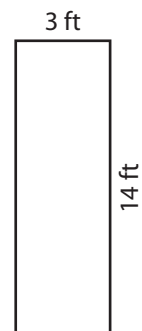
Perimeter = **46 in**

8)



Perimeter = **64 yd**

9)



Perimeter = **34 ft**