

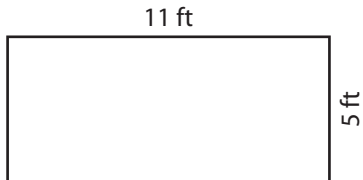
Name : _____

Perimeter of a Rectangle

T1L1S2

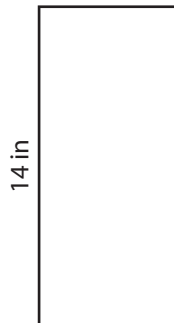
Find the perimeter of each rectangle.

1)



Perimeter =

2)



2 yd

7 yd

Perimeter =

4)



Perimeter =

PREVIEW
Gain complete access to the largest collection of worksheets in all subjects!

Members, please log in to download this worksheet.

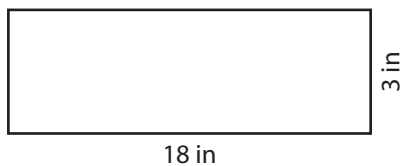
Not a member? Please sign up to gain complete access.

www.mathworksheets4kids.com

12 in

Perimeter =

7)



Perimeter =

10 ft

Perimeter =

8 yd



Perimeter =

Name : _____

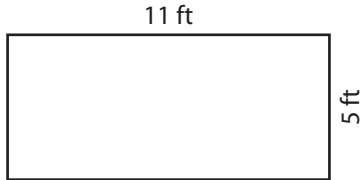
Answer key

Perimeter of a Rectangle

T1L1S2

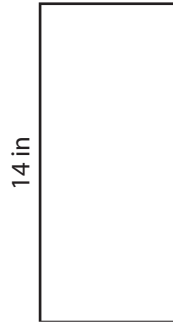
Find the perimeter of each rectangle.

1)

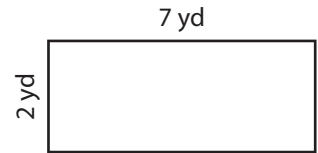


Perimeter = **32 ft**

2)



3)



Perimeter = **18 yd**

4)



Perimeter = **20 yd**


PREVIEW

Gain complete access to the largest collection of worksheets in all subjects!

Members, please log in to download this worksheet.

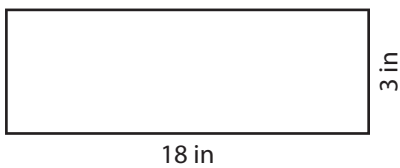
Not a member? Please sign up to gain complete access.

www.mathworksheets4kids.com

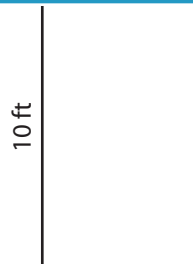


Perimeter = **62 in**

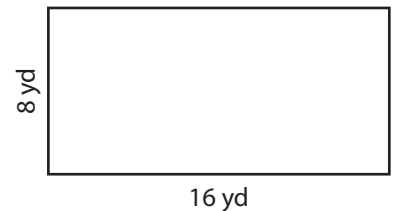
7)



Perimeter = **42 in**



Perimeter = **28 ft**



Perimeter = **48 yd**