


Name : _____

Perimeter of a Rectangle

T1L1S4

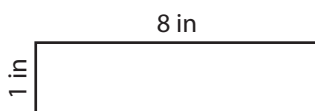
Find the perimeter of each rectangle.

1)



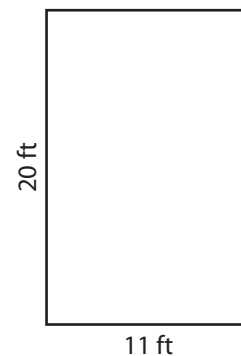
Perimeter =

2)




Perimeter =

3)



4)



Perimeter =

Gain complete access to the largest collection of worksheets in all subjects!

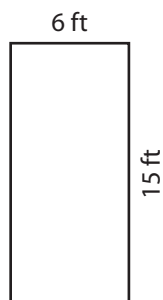
Members, please log in to download this worksheet.

Not a member? Please sign up to gain complete access.

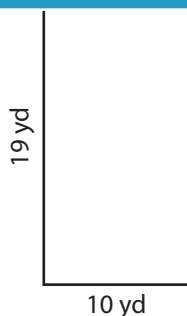
www.mathworksheets4kids.com

Perimeter =


7)



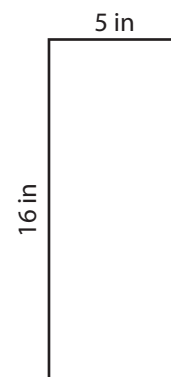
Perimeter =



Perimeter =



Perimeter =



Perimeter =

Name : _____

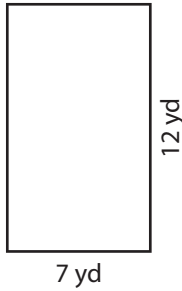
Answer key

Perimeter of a Rectangle

T1L1S4


Find the perimeter of each rectangle.

1)

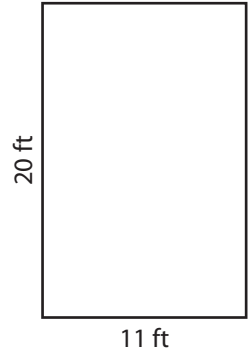


Perimeter = **38 yd**

2)

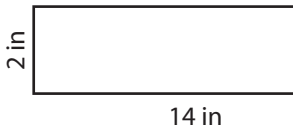


3)



Perimeter = **62 ft**

4)



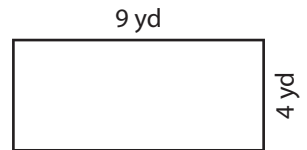
Perimeter = **32 in**

Gain complete access to the largest collection of worksheets in all subjects!

Members, please log in to download this worksheet.

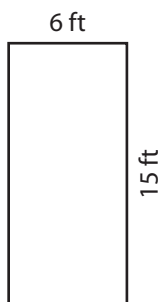
Not a member? Please sign up to gain complete access.

www.mathworksheets4kids.com

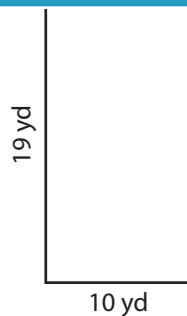


Perimeter = **26 yd**

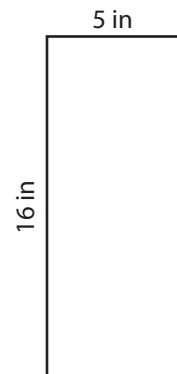
7)



Perimeter = **42 ft**



Perimeter = **58 yd**



Perimeter = **42 in**