

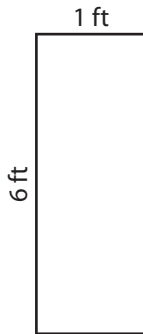
Name : _____

Perimeter of a Rectangle

T1L1S5

Find the perimeter of each rectangle.

1)



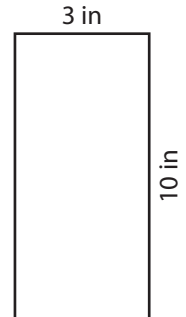
Perimeter =

2)



Perimeter =

3)



4)



Perimeter =

PREVIEW
Gain complete access to the largest collection of worksheets in all subjects!

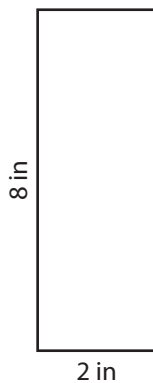
Members, please log in to download this worksheet.

Not a member? Please sign up to gain complete access.


www.mathworksheets4kids.com

Perimeter =

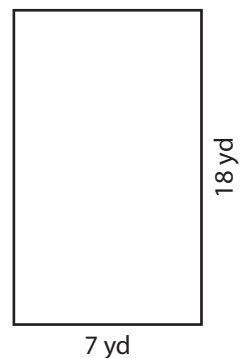
7)



Perimeter =



Perimeter =



Perimeter =

Name : _____

Answer key

Perimeter of a Rectangle

T1L1S5

Find the perimeter of each rectangle.

1)



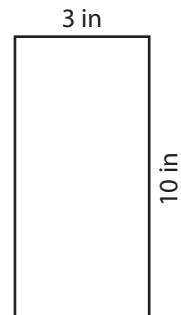
Perimeter = **14 ft**

2)




Perimeter = **26 in**

3)



4)



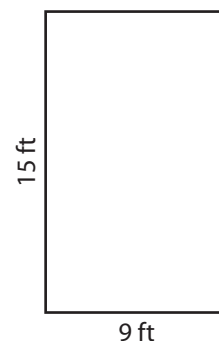
Perimeter = **66 yd**

PREVIEW
Gain complete access to the largest collection of worksheets in all subjects!

Members, please log in to download this worksheet.

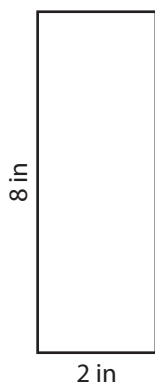
Not a member? Please sign up to gain complete access.

www.mathworksheets4kids.com




Perimeter = **48 ft**

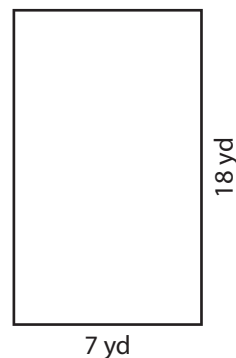
7)



Perimeter = **20 in**



Perimeter = **60 ft**



Perimeter = **50 yd**