

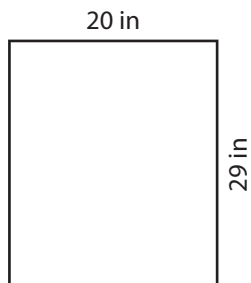
Name : \_\_\_\_\_

## Perimeter of a Rectangle

T1L2S1

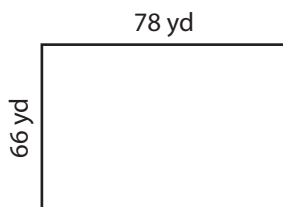
Find the perimeter of each rectangle.

1)




Perimeter =

2)

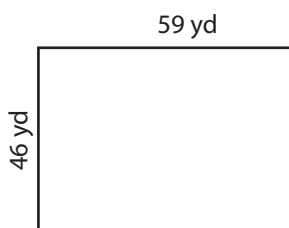


Perimeter =

3)



4)



Perimeter =

**PREVIEW**  
Gain complete access to the largest collection of worksheets in all subjects!

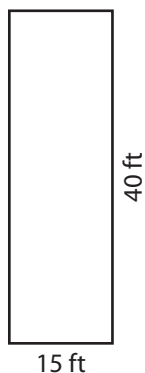
Members, please log in to download this worksheet.

Not a member? Please sign up to gain complete access.


[www.mathworksheets4kids.com](http://www.mathworksheets4kids.com)

Perimeter =

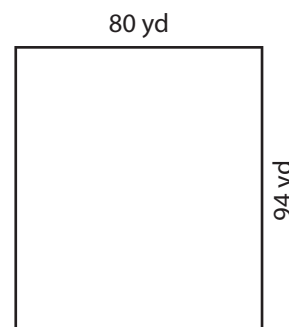
7)



Perimeter =



Perimeter =



Perimeter =

Name : \_\_\_\_\_

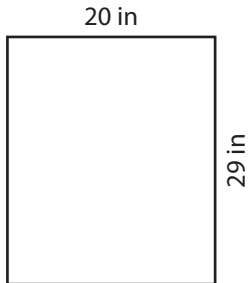
## Answer key

### Perimeter of a Rectangle

T1L2S1

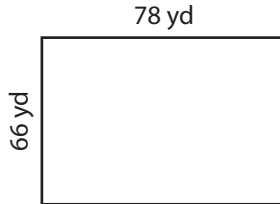
Find the perimeter of each rectangle.

1)



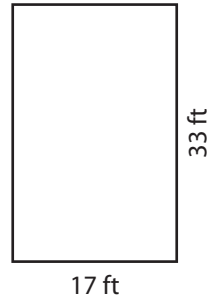
Perimeter = **98 in**

2)

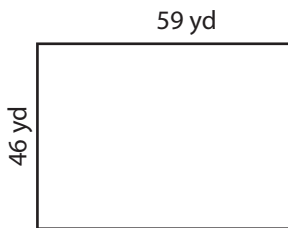


Perimeter = **100 ft**

3)



4)



Perimeter = **210 y**

Gain complete access to the largest collection of worksheets in all subjects!

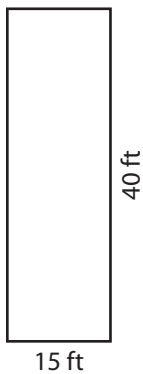
Members, please log in to download this worksheet.

Not a member? Please sign up to gain complete access.


[www.mathworksheets4kids.com](http://www.mathworksheets4kids.com)

Perimeter = **180 in**

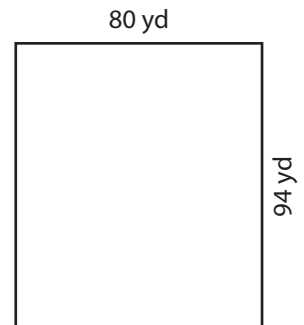
7)



Perimeter = **110 ft**



Perimeter = **246 in**



Perimeter = **348 yd**