

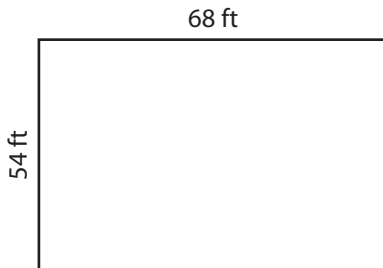
Name : _____

Perimeter of a Rectangle

T1L2S2

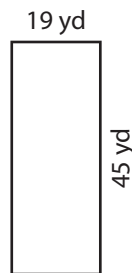
Find the perimeter of each rectangle.

1)




Perimeter =

2)

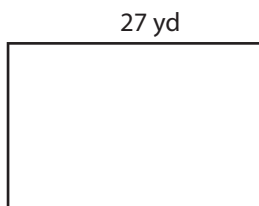


Perimeter =

3)



4)



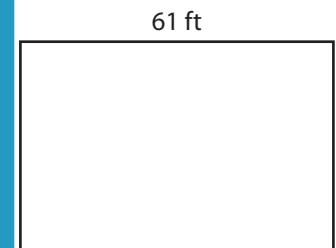
Perimeter =

Gain complete access to the largest collection of worksheets in all subjects!

Members, please log in to download this worksheet.

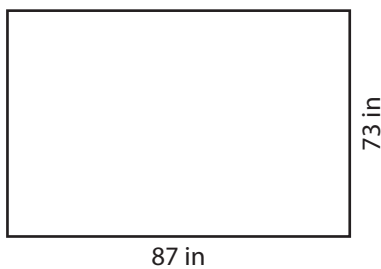
Not a member? Please sign up to gain complete access.

www.mathworksheets4kids.com



Perimeter =

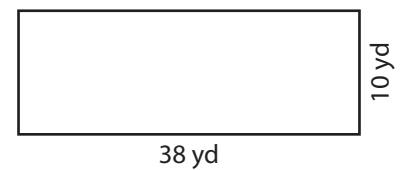
7)



Perimeter =



Perimeter =



Perimeter =

Name : _____

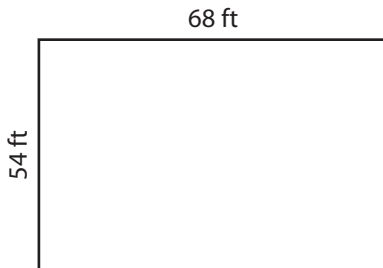
Answer key

T1L2S2

Perimeter of a Rectangle

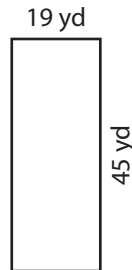
Find the perimeter of each rectangle.

1)




Perimeter = **244 ft**

2)

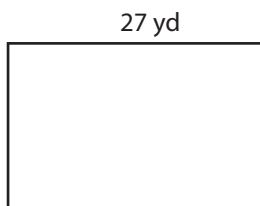


Perimeter = **106 in**

3)



4)



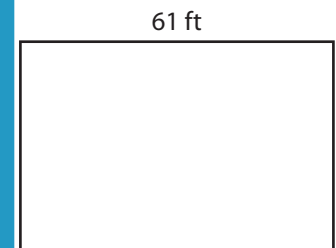
Perimeter = **80 yd**

Gain complete access to the largest collection of worksheets in all subjects!

Members, please log in to download this worksheet.

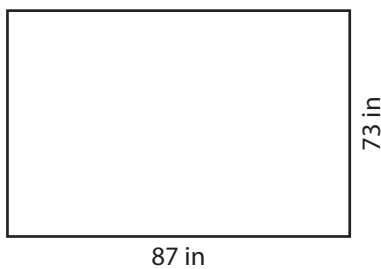
Not a member? Please sign up to gain complete access.

www.mathworksheets4kids.com



Perimeter = **206 ft**

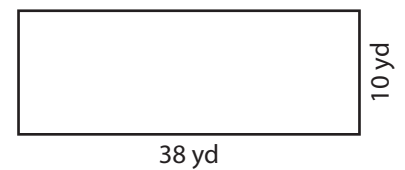
7)



Perimeter = **320 in**



Perimeter = **144 ft**



Perimeter = **96 yd**