

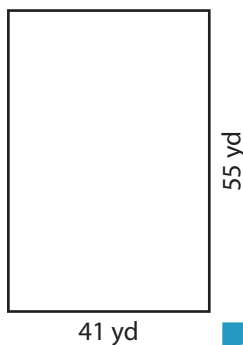
Name : \_\_\_\_\_

## Perimeter of a Rectangle

T1L2S3

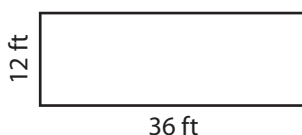
Find the perimeter of each rectangle.

1)



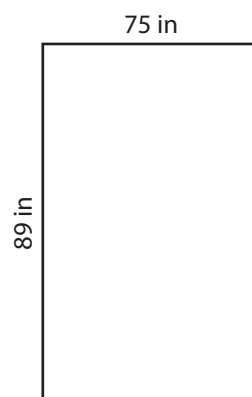
Perimeter =

2)



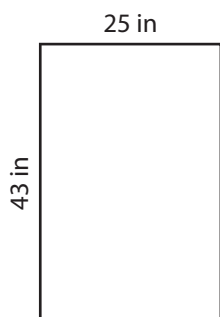
Perimeter =

3)



Perimeter =

4)



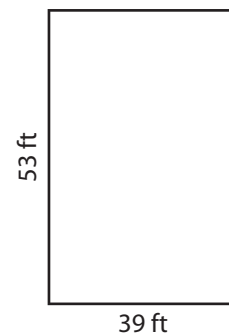
Perimeter =

**PREVIEW**  
Gain complete access to the largest collection of worksheets in all subjects!

Members, please log in to download this worksheet.


Not a member? Please sign up to gain complete access.

[www.mathworksheets4kids.com](http://www.mathworksheets4kids.com)




Perimeter =

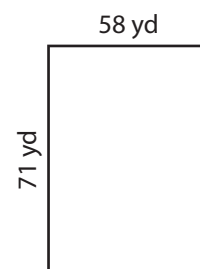
7)



Perimeter =



Perimeter =



Perimeter =

Name : \_\_\_\_\_

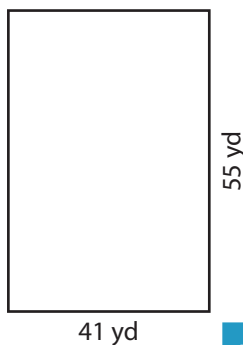
## Answer key

### Perimeter of a Rectangle

T1L2S3

Find the perimeter of each rectangle.

1)

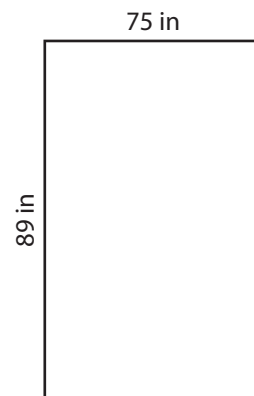


Perimeter = **192 yd**

2)

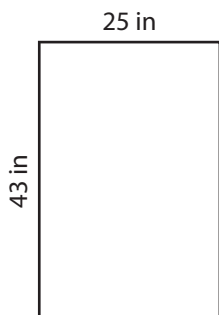


3)



Perimeter = **328 in**

4)



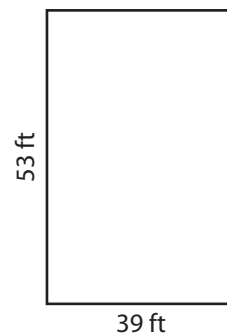
Perimeter = **136 in**

Gain complete access to the largest collection of worksheets in all subjects!

Members, please log in to download this worksheet.


Not a member? Please sign up to gain complete access.

[www.mathworksheets4kids.com](http://www.mathworksheets4kids.com)




Perimeter = **184 ft**

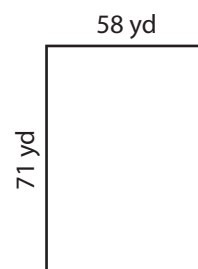
7)



Perimeter = **334 ft**



Perimeter = **224 in**



Perimeter = **258 yd**