

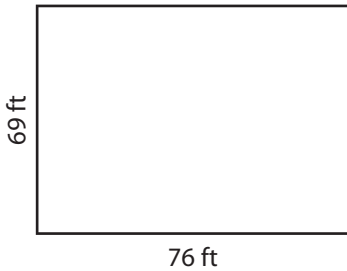
Name : \_\_\_\_\_

# Perimeter of a Rectangle

T1L2S4

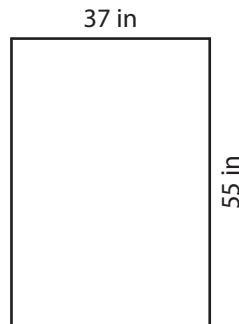
Find the perimeter of each rectangle.

1)



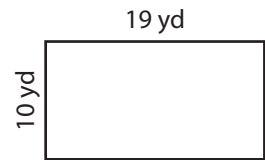
Perimeter =

2)




Perimeter =

3)



4)




Perimeter =

**PREVIEW**  
Gain complete access to the largest collection of worksheets in all subjects!

Members, please log in to download this worksheet.

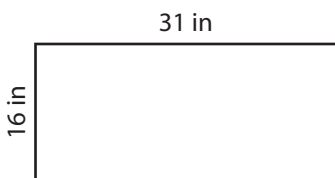
Not a member? Please sign up to gain complete access.

[www.mathworksheets4kids.com](http://www.mathworksheets4kids.com)



Perimeter =

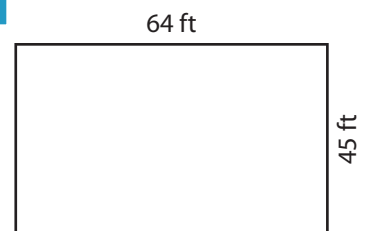
7)



Perimeter =



Perimeter =



Perimeter =

Name : \_\_\_\_\_

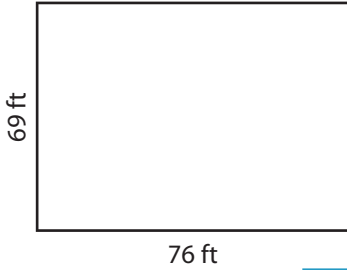
## Answer key

T1L2S4

### Perimeter of a Rectangle

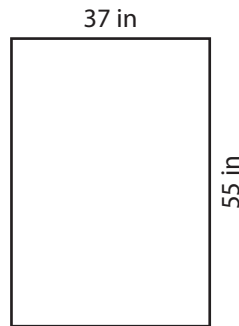
Find the perimeter of each rectangle.

1)



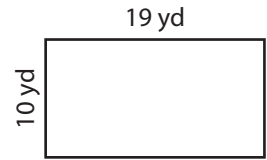
Perimeter = **290 ft**

2)




Perimeter = **58 yd**

3)



4)




Perimeter = **272 yd**

Gain complete access to the largest collection of worksheets in all subjects!

Members, please log in to download this worksheet.

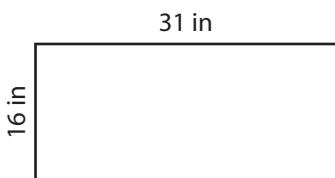
Not a member? Please sign up to gain complete access.

[www.mathworksheets4kids.com](http://www.mathworksheets4kids.com)



Perimeter = **336 in**

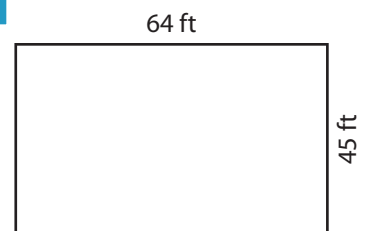
7)



Perimeter = **94 in**



Perimeter = **312 yd**



Perimeter = **218 ft**