

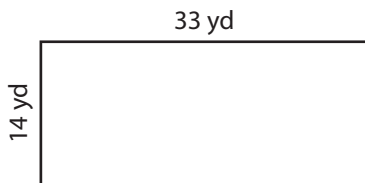
Name : _____

Perimeter of a Rectangle

T1L2S5


Find the perimeter of each rectangle.

1)



Perimeter =

2)



3)



Perimeter =

4)



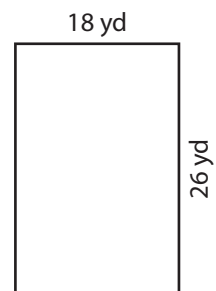
Perimeter =

Gain complete access to the largest collection of worksheets in all subjects!

Members, please log in to download this worksheet.

Not a member? Please sign up to gain complete access.

www.mathworksheets4kids.com



Perimeter =

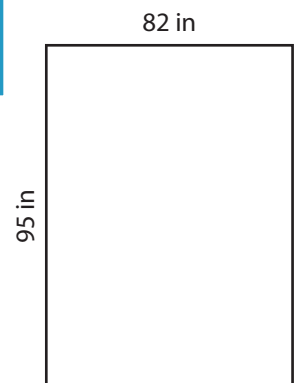
7)



Perimeter =



Perimeter =



Perimeter =

Name : _____

Answer key

T1L2S5

Perimeter of a Rectangle

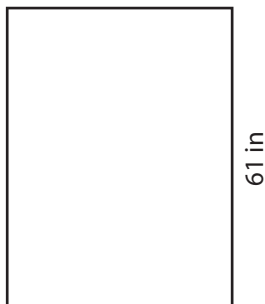
Find the perimeter of each rectangle.

1)




Perimeter = **94 yd**

2)



Perimeter = **256 ft**

4)



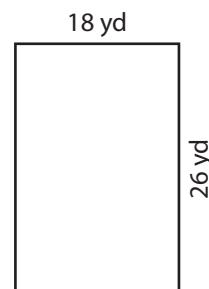
Perimeter = **154 in**

Gain complete access to the largest collection of worksheets in all subjects!

Members, please log in to download this worksheet.

Not a member? Please sign up to gain complete access.

www.mathworksheets4kids.com



Perimeter = **88 yd**

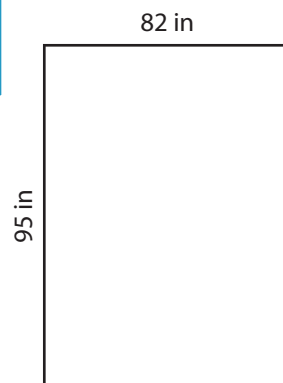
7)



Perimeter = **288 ft**



Perimeter = **116 yd**



Perimeter = **354 in**