

Name : \_\_\_\_\_

## Perimeter of a Rectangle

T2L1S1

A) Find the perimeter of each rectangle for the given measurements.

1) length = 13 ft, width = 8 ft

Perimeter = \_\_\_\_\_

2) width = 3 yd, length = 17 yd

Perimeter = \_\_\_\_\_

3) width = 5 in, length = 19 in


Perimeter = \_\_\_\_\_

4) length = 11 ft, width = 7 ft

Perimeter = \_\_\_\_\_

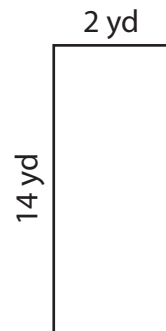
B) Find the perimeter of each rectangle.

5)



Perimeter = \_\_\_\_\_

6)



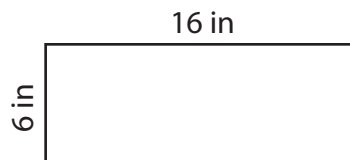
Perimeter = \_\_\_\_\_

7)



Perimeter = \_\_\_\_\_

8)



Perimeter = \_\_\_\_\_

9) The length and the width of a rectangle are 20 yards and 9 yards respectively. Determine the perimeter of the rectangle.

\_\_\_\_\_

Name : \_\_\_\_\_

## Answer key

T2L1S1

### Perimeter of a Rectangle

A) Find the perimeter of each rectangle for the given measurements.

1) length = 13 ft, width = 8 ft

Perimeter = 42 ft

2) width = 3 yd, length = 17 yd

Perimeter = 40 yd

3) width = 5 in, length = 19 in


Perimeter = 48 in

4) length = 11 ft, width = 7 ft

Perimeter = 36 ft

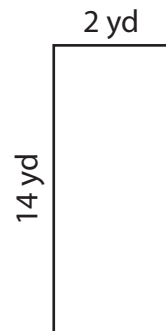
B) Find the perimeter of each rectangle.

5)



Perimeter = 50 in

6)



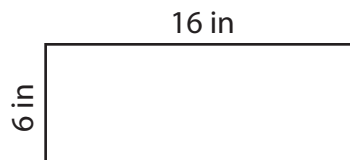
Perimeter = 32 yd

7)



Perimeter = 26 ft

8)



Perimeter = 44 in

9) The length and the width of a rectangle are 20 yards and 9 yards respectively. Determine the perimeter of the rectangle.

58 yards