

Name : _____

Perimeter of a Rectangle

T2L1S3

A) Find the perimeter of each rectangle for the given measurements.

1) length = 16 yd, width = 9 yd

Perimeter = _____

2) length = 18 in, width = 12 in

Perimeter = _____

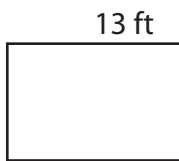
3) width = 8 ft, length = 11 ft

4) width = 1 yd, length = 5 yd

Perimeter = _____

B) Find the perimeter

5)



Perimeter = _____

7)



Perimeter = _____

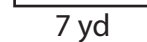
PREVIEW

Gain complete access to the largest collection of worksheets in all subjects!

Members, please log in to download this worksheet.

Not a member? Please sign up to gain complete access.

www.mathworksheets4kids.com



Perimeter = _____

9) The width and the length of a rectangle are 4 feet and 14 feet respectively. Find the perimeter of the rectangle.

Name : _____

Answer key

T2L1S3

Perimeter of a Rectangle

A) Find the perimeter of each rectangle for the given measurements.

1) length = 16 yd, width = 9 yd

Perimeter = 50 yd

2) length = 18 in, width = 12 in

Perimeter = 60 in

3) width = 8 ft, length = 11 ft

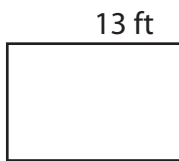
4) width = 1 yd, length = 5 yd

Perimeter = _____


12 yd

B) Find the perimeter

5)



Gain complete access to the largest collection of worksheets in all subjects!



Perimeter = _____

68 in

7)



www.mathworksheets4kids.com



Perimeter = 60 in

Perimeter = 34 yd

9) The width and the length of a rectangle are 4 feet and 14 feet respectively. Find the perimeter of the rectangle.

36 feet