

Name : _____

Perimeter of a Rectangle

T2L1S4

A) Find the perimeter of each rectangle for the given measurements.

1) width = 2 ft, length = 11 ft

Perimeter = _____

2) width = 8 ft, length = 16 ft

Perimeter = _____

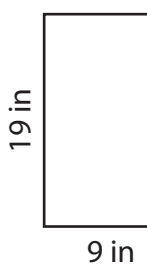
3) length = 17 in, width = 12 in

4) length = 6 yd, width = 3 yd

Perimeter = _____

B) Find the perimeter

5)



Perimeter = _____

PREVIEW
Gain complete access to the largest collection of worksheets in all subjects!

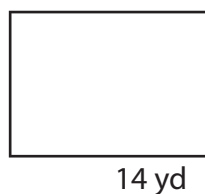
Members, please log in to download this worksheet.

Not a member? Please sign up to gain complete access.

www.mathworksheets4kids.com

20 ft

7)



Perimeter = _____

Perimeter = _____

9) A rectangle has a length of 13 yards and a width of 7 yards. Determine the perimeter of the rectangle.

Name : _____

Answer key

T2L1S4

Perimeter of a Rectangle

A) Find the perimeter of each rectangle for the given measurements.

1) width = 2 ft, length = 11 ft

Perimeter = 26 ft

2) width = 8 ft, length = 16 ft

Perimeter = 48 ft

3) length = 17 in, width = 12 in

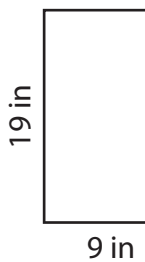
Perimeter = _____

4) length = 6 yd, width = 3 yd

18 yd

B) Find the perimeter

5)



Perimeter = _____

Gain complete access to the largest collection of worksheets in all subjects!

Members, please log in to download this worksheet.

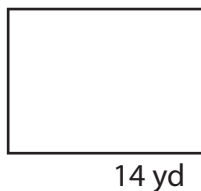
Not a member? Please sign up to gain complete access.

www.mathworksheets4kids.com

20 ft

68 ft

7)



Perimeter = 40 yd



Perimeter = 66 in

9) A rectangle has a length of 13 yards and a width of 7 yards. Determine the perimeter of the rectangle.

40 yards