

Name : \_\_\_\_\_

## Perimeter of a Rectangle

T2L2S1

A) Find the perimeter of each rectangle for the given measurements.

1) length = 25 in, width = 20 in

Perimeter = \_\_\_\_\_

2) width = 18 ft, length = 19 ft

Perimeter = \_\_\_\_\_

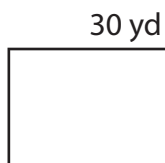
3) width = 43 yd, length = 66 yd

4) length = 52 in, width = 31 in

Perimeter = \_\_\_\_\_

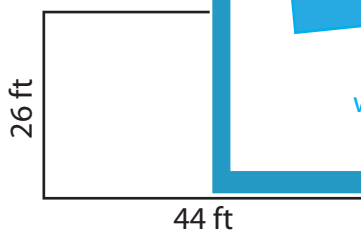
B) Find the perimeter

5)



Perimeter = \_\_\_\_\_

7)



Perimeter = \_\_\_\_\_

**PREVIEW**

Gain complete access to the largest collection of worksheets in all subjects!

Members, please log in to download this worksheet.

Not a member? Please sign up to gain complete access.

[www.mathworksheets4kids.com](http://www.mathworksheets4kids.com)

Perimeter = \_\_\_\_\_

9) The length and the width of a rectangle are 90 feet and 80 feet respectively. Find the perimeter of the rectangle.

\_\_\_\_\_

Name : \_\_\_\_\_

## Answer key

T2L2S1

### Perimeter of a Rectangle

A) Find the perimeter of each rectangle for the given measurements.

1) length = 25 in, width = 20 in

Perimeter = 90 in

2) width = 18 ft, length = 19 ft

Perimeter = 74 ft

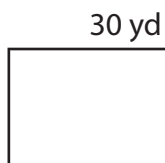
3) width = 43 yd, length = 66 yd

4) length = 52 in, width = 31 in

Perimeter = 166 in

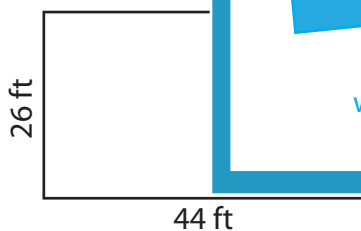
B) Find the perimeter

5)



Perimeter = \_\_\_\_\_

7)



Perimeter = 140 ft

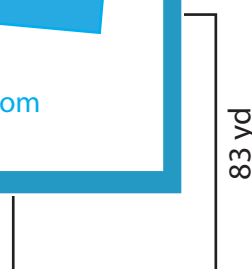
**PREVIEW**  
Gain complete access to the largest collection of worksheets in all subjects!

Members, please log in to download this worksheet.

Not a member? Please sign up to gain complete access.

[www.mathworksheets4kids.com](http://www.mathworksheets4kids.com)

Perimeter = 294 in



Perimeter = 284 yd

9) The length and the width of a rectangle are 90 feet and 80 feet respectively. Find the perimeter of the rectangle.

340 feet