

Name : \_\_\_\_\_

## Perimeter of a Rectangle

T2L2S2

A) Find the perimeter of each rectangle for the given measurements.

1) width = 12 ft, length = 34 ft

Perimeter = \_\_\_\_\_

2) length = 41 yd, width = 21 yd

Perimeter = \_\_\_\_\_

3) length = 95 in, width = 87 in

Perimeter = \_\_\_\_\_

4) width = 45 ft, length = 60 ft

B) Find the perimeter

5)



Perimeter = \_\_\_\_\_

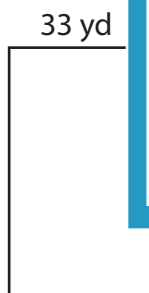
**PREVIEW**  
Gain complete access to the largest collection of worksheets in all subjects!

Members, please log in to download this worksheet.

Not a member? Please sign up to gain complete access.

[www.mathworksheets4kids.com](http://www.mathworksheets4kids.com)

7)



Perimeter = \_\_\_\_\_

59 in

Perimeter = \_\_\_\_\_

9) Determine the perimeter of the rectangle, if its length is 76 yards and width is 58 yards.

\_\_\_\_\_

Name : \_\_\_\_\_

## Answer key

T2L2S2

### Perimeter of a Rectangle

A) Find the perimeter of each rectangle for the given measurements.

1) width = 12 ft, length = 34 ft

Perimeter = 92 ft

2) length = 41 yd, width = 21 yd

Perimeter = 124 yd

3) length = 95 in, width = 87 in

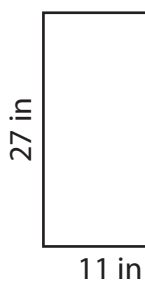
Perimeter = \_\_\_\_\_

4) width = 45 ft, length = 60 ft

210 ft

B) Find the perimeter

5)



Perimeter = \_\_\_\_\_

**PREVIEW**  
Gain complete access to the largest collection of worksheets in all subjects!

Members, please log in to download this worksheet.

Not a member? Please sign up to gain complete access.

[www.mathworksheets4kids.com](http://www.mathworksheets4kids.com)

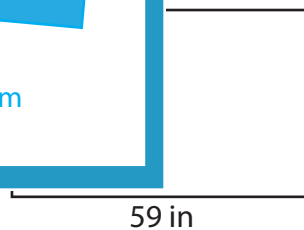


304 ft

7)



Perimeter = 192 yd



Perimeter = 210 in

9) Determine the perimeter of the rectangle, if its length is 76 yards and width is 58 yards.

268 yards