

Name : _____

Perimeter of a Rectangle

T2L2S3

A) Find the perimeter of each rectangle for the given measurements.

1) length = 40 yd, width = 30 yd

Perimeter = _____

2) length = 75 in, width = 42 in

Perimeter = _____


3) width = 57 ft, length = 64 ft

4) width = 16 yd, length = 26 yd

Perimeter = _____

B) Find the perimeter

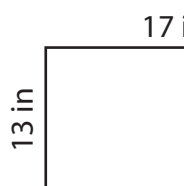
5)



29 ft

Perimeter = _____

7)



13 in

17 in

Perimeter = _____

PREVIEW

Gain complete access to the largest collection of worksheets in all subjects!

Members, please log in to download this worksheet.

Not a member? Please sign up to gain complete access.

www.mathworksheets4kids.com

70 ft

Perimeter = _____

9) What is the perimeter of the rectangle whose length is 80 inches and width is 75 inches?

Name : _____

Answer key

T2L2S3

Perimeter of a Rectangle

A) Find the perimeter of each rectangle for the given measurements.

1) length = 40 yd, width = 30 yd

Perimeter = 140 yd

2) length = 75 in, width = 42 in

Perimeter = 234 in

3) width = 57 ft, length = 64 ft


4) width = 16 yd, length = 26 yd

Perimeter = _____

84 yd

B) Find the perimeter

5)



29 ft

Perimeter = _____

Gain complete access to the largest collection of worksheets in all subjects!

Members, please log in to download this worksheet.

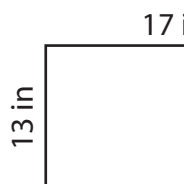
Not a member? Please sign up to gain complete access.

www.mathworksheets4kids.com

yd

108 yd

7)



13 in

17 in

Perimeter = 60 in



70 ft

61 ft

Perimeter = 262 ft

9) What is the perimeter of the rectangle whose length is 80 inches and width is 75 inches?

310 inches