

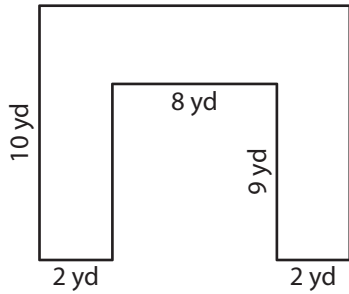
Name : _____

Rectilinear Shapes

Sheet 2

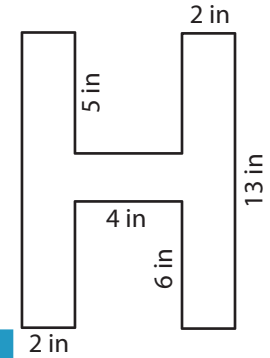
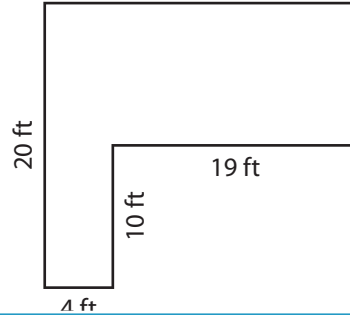
Find the perimeter of each shape.

1)



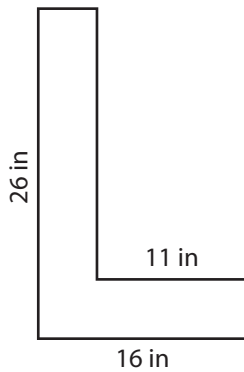
Perimeter = _____

2)



Perimeter = _____

4)



Perimeter = _____

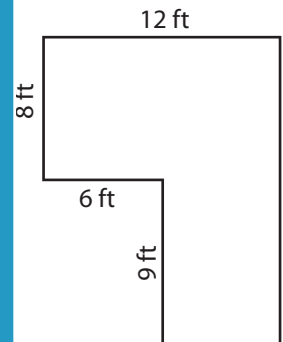
PREVIEW

Gain complete access to the largest collection of worksheets in all subjects!

Members, please log in to download this worksheet.

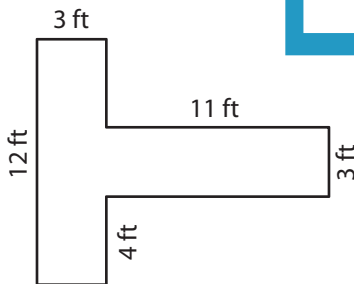
Not a member? Please sign up to gain complete access.

www.mathworksheets4kids.com

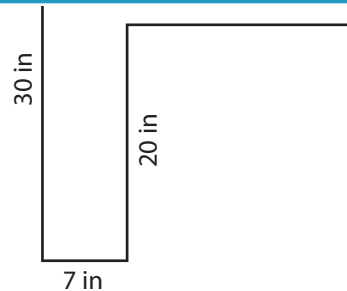


Perimeter = _____

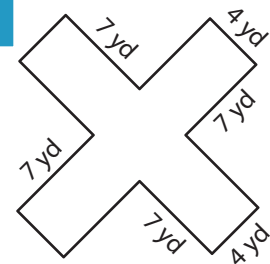
7)



Perimeter = _____



Perimeter = _____



Perimeter = _____

Name : _____

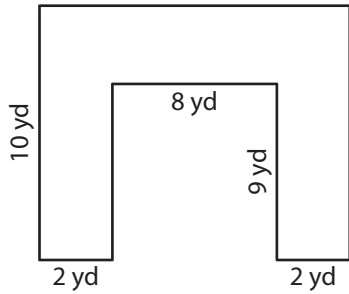
Answer key

Rectilinear Shapes

Sheet 2

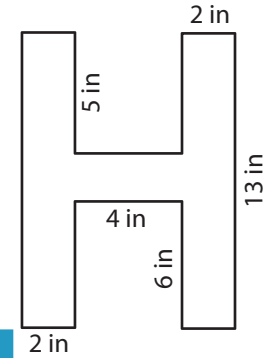
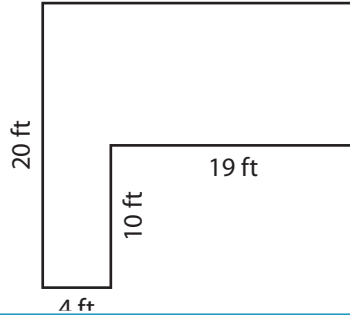
Find the perimeter of each shape.

1)



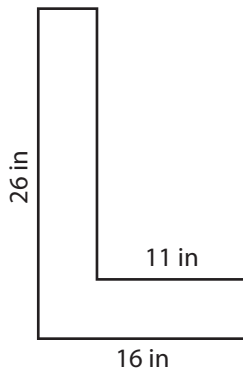
Perimeter = **62**

2)



Perimeter = **64 in**

4)



Perimeter = **84**

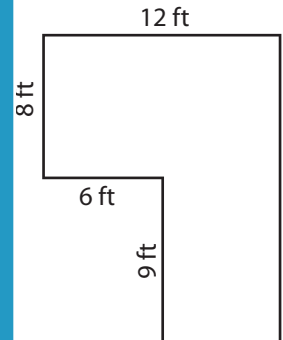
PREVIEW

Gain complete access to the largest collection of worksheets in all subjects!

Members, please log in to download this worksheet.

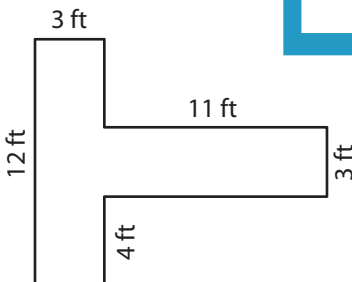
Not a member? Please sign up to gain complete access.

www.mathworksheets4kids.com

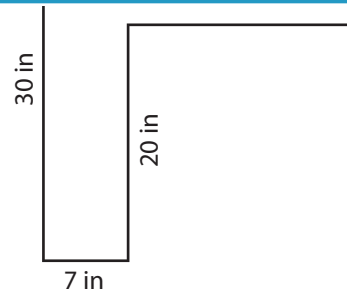


Perimeter = **58 ft**

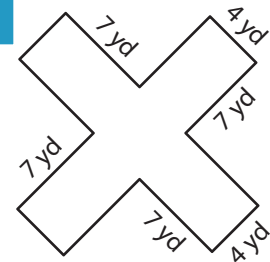
7)



Perimeter = **52 ft**



Perimeter = **110 in**



Perimeter = **72 yd**