

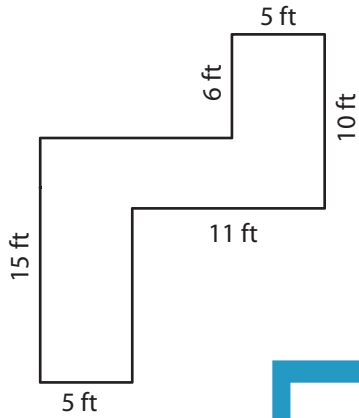
Name : _____

Rectilinear Shapes

Sheet 4

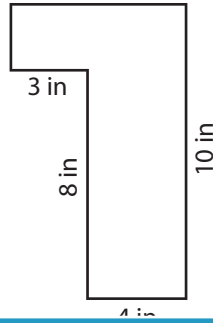
Find the perimeter of each shape.

1)

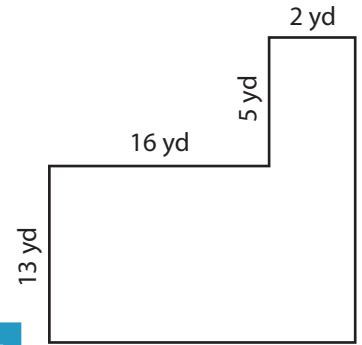


Perimeter = _____

2)

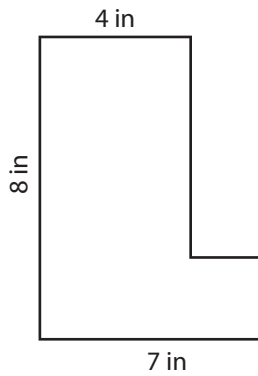


3)



Perimeter = _____

4)



Perimeter = _____

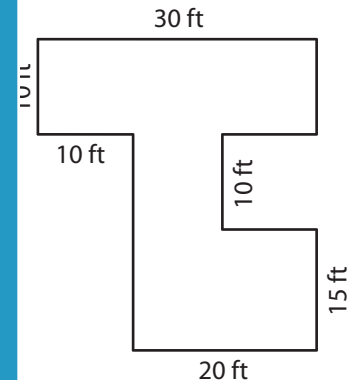
PREVIEW

Gain complete access to the largest collection of worksheets in all subjects!

Members, please log in to download this worksheet.

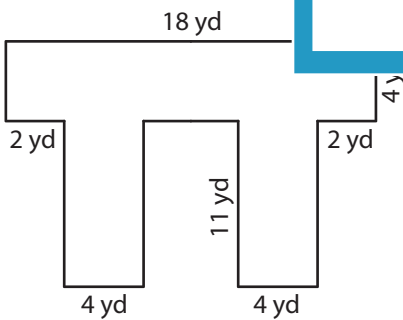
Not a member? Please sign up to gain complete access.

www.mathworksheets4kids.com

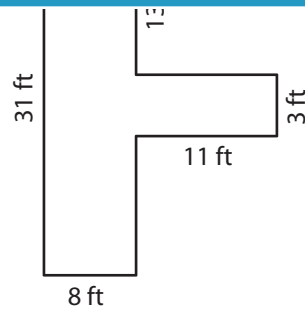


Perimeter = _____

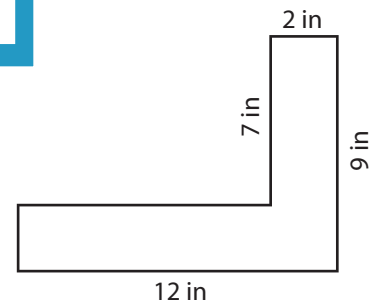
7)



Perimeter = _____



Perimeter = _____



Perimeter = _____

Name : _____

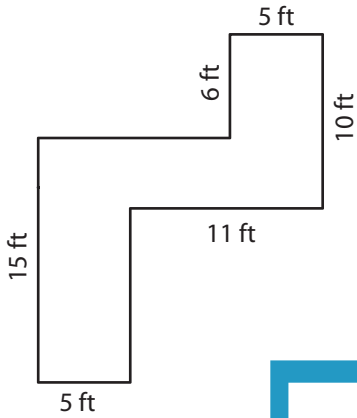
Answer key

Rectilinear Shapes

Sheet 4

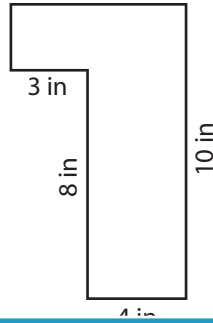
Find the perimeter of each shape.

1)

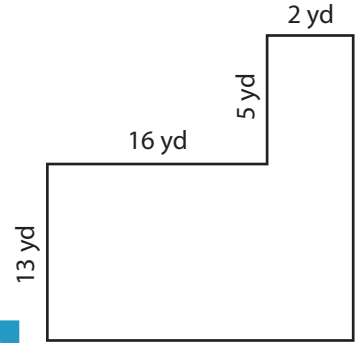


Perimeter = 74

2)

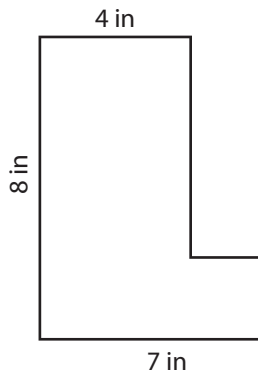


3)



Perimeter = 72 yd

4)



Perimeter = 30

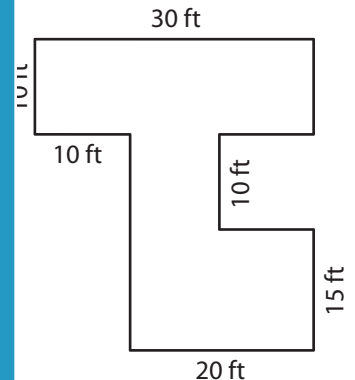
PREVIEW

Gain complete access to the largest collection of worksheets in all subjects!

Members, please log in to download this worksheet.

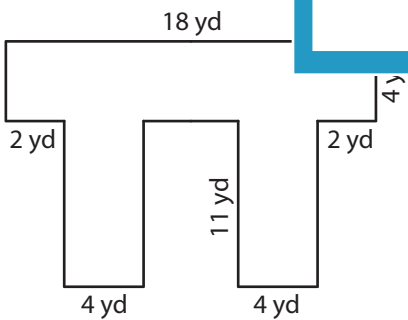
Not a member? Please sign up to gain complete access.

www.mathworksheets4kids.com

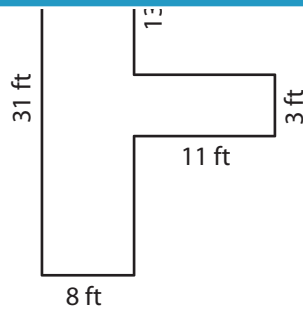


Perimeter = 150 ft

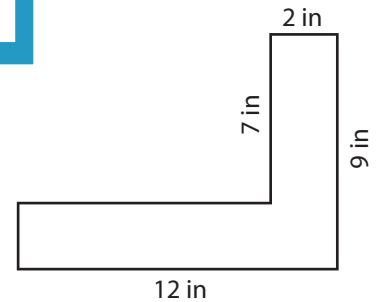
7)



Perimeter = 88 yd



Perimeter = 100 ft



Perimeter = 42 in