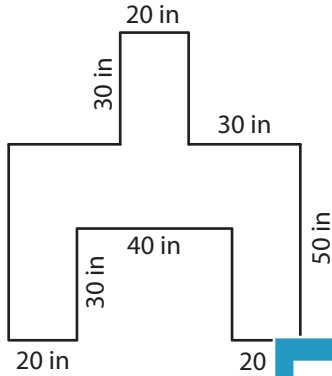


Name : _____

Rectilinear Shapes

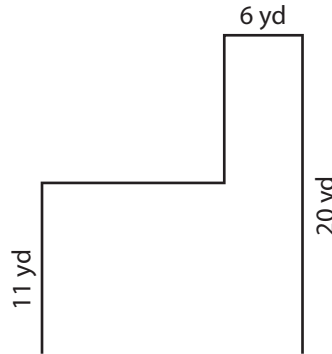
Find the perimeter of each shape.

1)

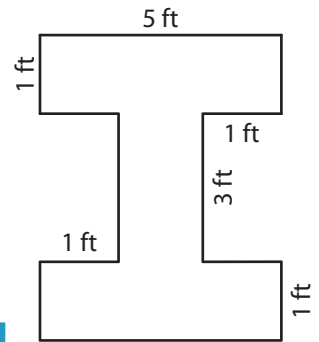


Perimeter = _____

2)

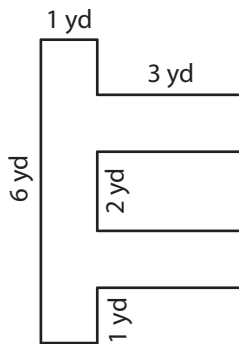


3)



Perimeter = _____

4)



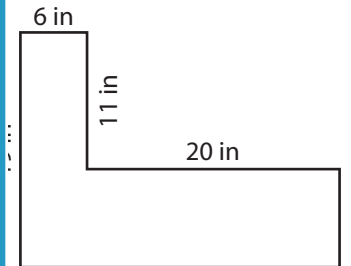
Perimeter = _____

Gain complete access to the largest collection of worksheets in all subjects!

Members, please log in to download this worksheet.

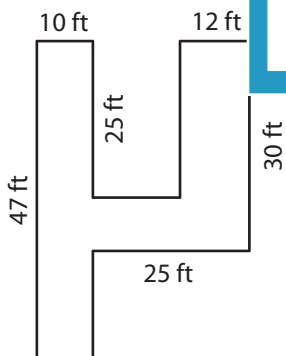
Not a member? Please sign up to gain complete access.

www.mathworksheets4kids.com

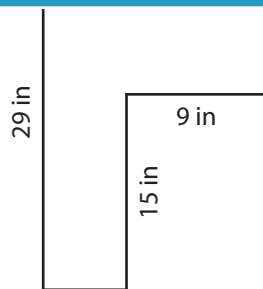


Perimeter = _____

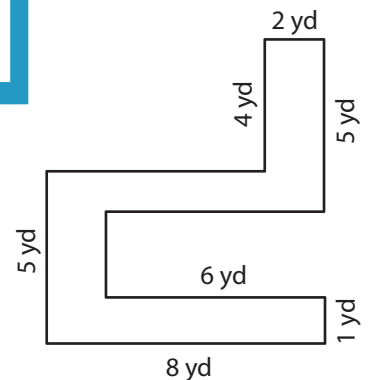
7)



Perimeter = _____



Perimeter = _____



Perimeter = _____

Name : _____

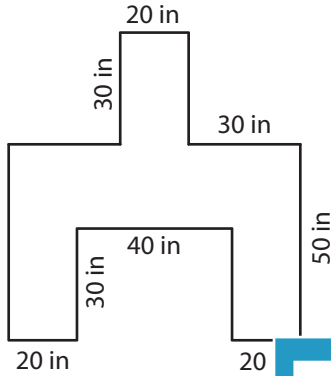
Answer key

Rectilinear Shapes

Sheet 5

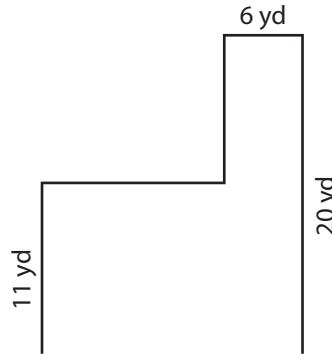
Find the perimeter of each shape.

1)

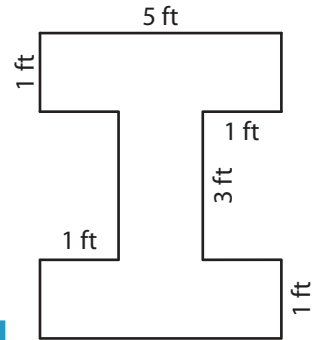


Perimeter = **380**

2)

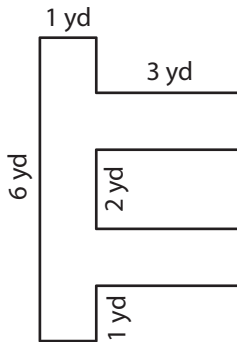


3)



Perimeter = **24 ft**

4)



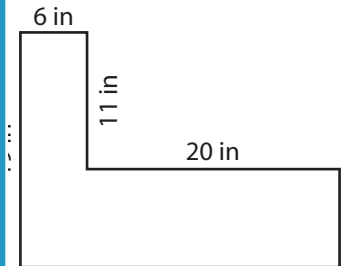
Perimeter = **26**

Gain complete access to the largest collection of worksheets in all subjects!

Members, please log in to download this worksheet.

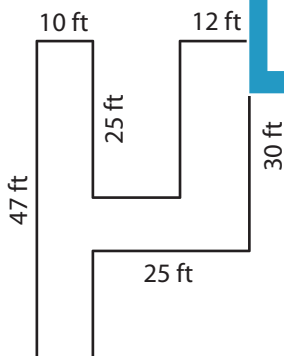
Not a member? Please sign up to gain complete access.

www.mathworksheets4kids.com

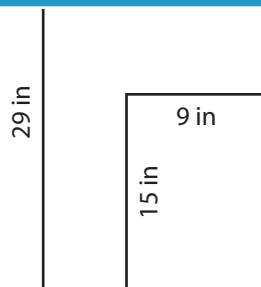


Perimeter = **90 in**

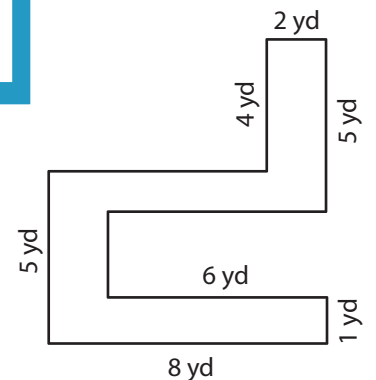
7)



Perimeter = **214 ft**



Perimeter = **92 in**



Perimeter = **46 yd**