

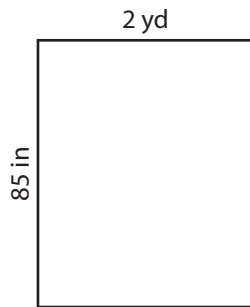
Name : _____

T1S1

Perimeter of a Rectangle

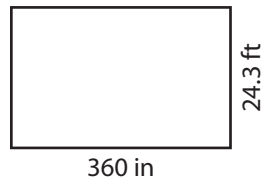
Find the perimeter of each rectangle.

1)



Perimeter = _____

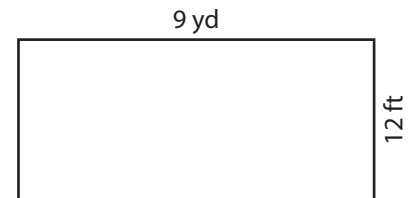
2)



360 in

24.3 ft

3)

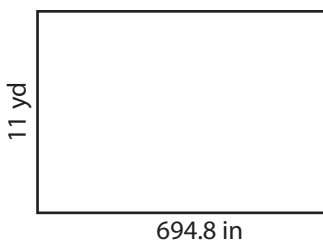


9 yd

12 ft

Perimeter = _____ yd

4)



11 yd

694.8 in

Perimeter = _____

PREVIEW
Gain complete access to the largest collection of worksheets in all subjects!

Members, please log in to download this worksheet.

Not a member? Please sign up to gain complete access.

www.mathworksheets4kids.com

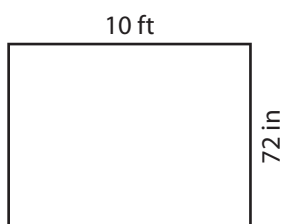


17 yd

43 ft

Perimeter = _____ ft

7)



10 ft

72 in

Perimeter = _____ ft



15 ft

1 yd

Perimeter = _____ yd



28.4 in

1.6 ft

Perimeter = _____ in

Name : _____

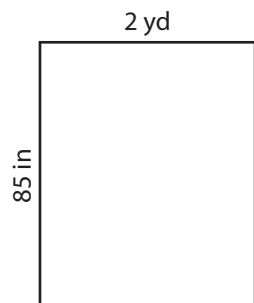
Answer key

T1S1

Perimeter of a Rectangle


Find the perimeter of each rectangle.

1)



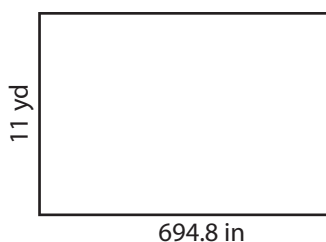
Perimeter = 314

2)



Perimeter = 26 yd

4)



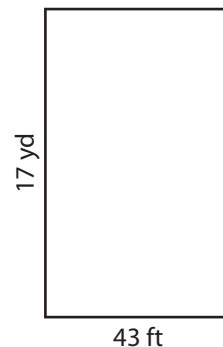
Perimeter = 60.6

Gain complete access to the largest collection of worksheets in all subjects!

Members, please log in to download this worksheet.

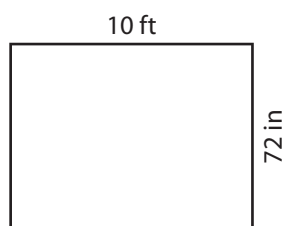
Not a member? Please sign up to gain complete access.

www.mathworksheets4kids.com



Perimeter = 188 ft

7)



Perimeter = 32 ft



Perimeter = 12 yd



Perimeter = 95.2 in