

Name : \_\_\_\_\_

T1S2

## Perimeter of a Rectangle


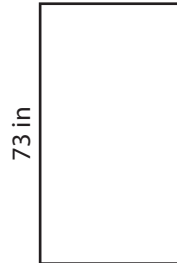
Find the perimeter of each rectangle.

1)



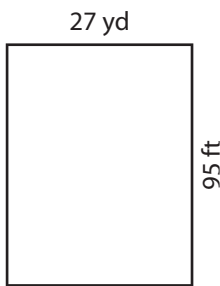
Perimeter = \_\_\_\_\_

2)



Perimeter = \_\_\_\_\_ ft

4)



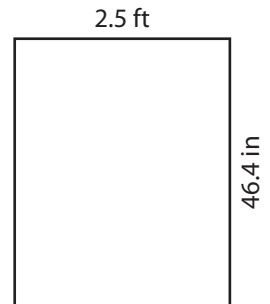
Perimeter = \_\_\_\_\_

Gain complete access to the largest collection of worksheets in all subjects!

Members, please log in to download this worksheet.

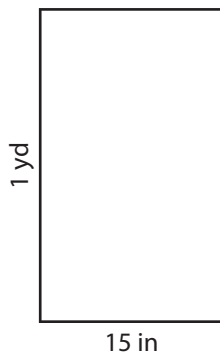
Not a member? Please sign up to gain complete access.

[www.mathworksheets4kids.com](http://www.mathworksheets4kids.com)

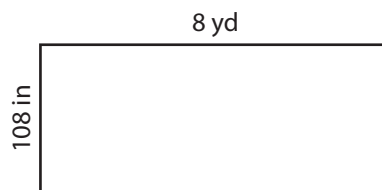


Perimeter = \_\_\_\_\_ in

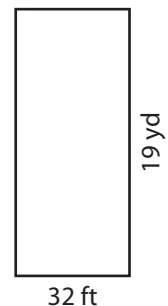
7)



Perimeter = \_\_\_\_\_ in



Perimeter = \_\_\_\_\_ yd



Perimeter = \_\_\_\_\_ ft

Name : \_\_\_\_\_


## Answer key

T1S2

### Perimeter of a Rectangle

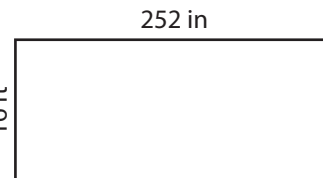
Find the perimeter of each rectangle.

1)



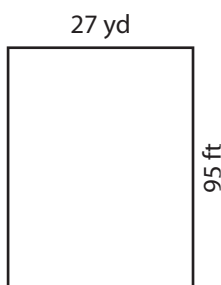
Perimeter = 239.4

2)



Perimeter = 74 ft

4)



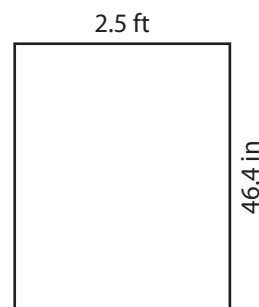
Perimeter = 352

Gain complete access to the largest collection of worksheets in all subjects!

Members, please log in to download this worksheet.

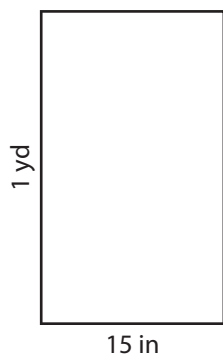
Not a member? Please sign up to gain complete access.

[www.mathworksheets4kids.com](http://www.mathworksheets4kids.com)



Perimeter = 152.8 in

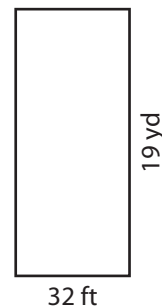
7)



Perimeter = 102 in



Perimeter = 22 yd



Perimeter = 178 ft