


Name : _____

T1S3

Perimeter of a Rectangle

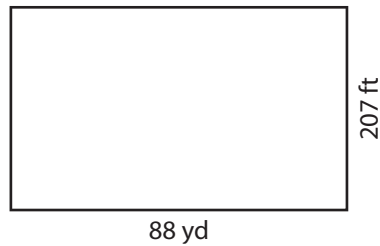
Find the perimeter of each rectangle.

1)



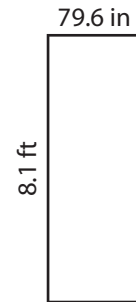
Perimeter = _____

2)

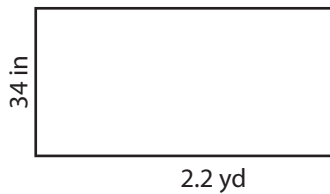


Perimeter = _____ in

3)



4)




Perimeter = _____

PREVIEW
Gain complete access to the largest collection of worksheets in all subjects!

Members, please log in to download this worksheet.

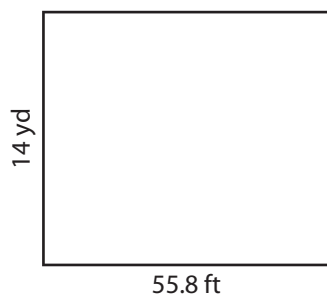
Not a member? Please sign up to gain complete access.

www.mathworksheets4kids.com




Perimeter = _____ yd

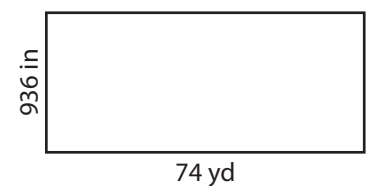
7)



Perimeter = _____ ft



Perimeter = _____ in



Perimeter = _____ yd

Name : _____


Answer key

T1S3

Perimeter of a Rectangle

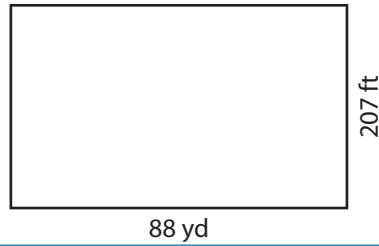
Find the perimeter of each rectangle.

1)



Perimeter = 82

2)

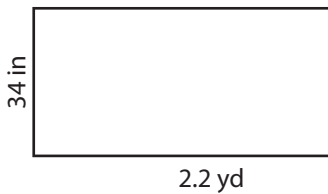


Perimeter = 353.6 in

3)



4)



Perimeter = 226.4

Gain complete access to the largest collection of worksheets in all subjects!

Members, please log in to download this worksheet.

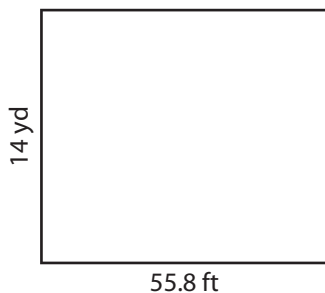
Not a member? Please sign up to gain complete access.

www.mathworksheets4kids.com



Perimeter = 18 yd

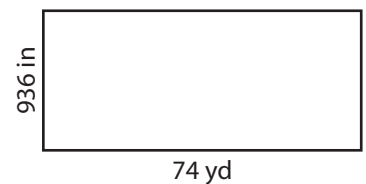
7)



Perimeter = 195.6 ft



Perimeter = 142.2 in



Perimeter = 200 yd