

Name : \_\_\_\_\_

T1S4

## Perimeter of a Rectangle

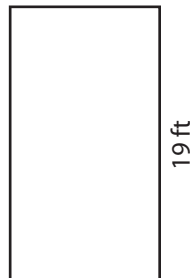
Find the perimeter of each rectangle.

1)



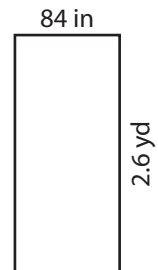
Perimeter = \_\_\_\_\_

2)




Perimeter = \_\_\_\_\_ in

3)



4)



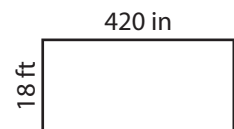
Perimeter = \_\_\_\_\_

**PREVIEW**  
Gain complete access to the largest collection of worksheets in all subjects!

Members, please log in to download this worksheet.

Not a member? Please sign up to gain complete access.

[www.mathworksheets4kids.com](http://www.mathworksheets4kids.com)




Perimeter = \_\_\_\_\_ ft

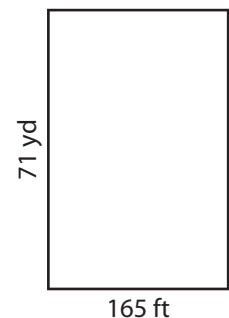
7)



Perimeter = \_\_\_\_\_ in



Perimeter = \_\_\_\_\_ yd



Perimeter = \_\_\_\_\_ yd

Name : \_\_\_\_\_

## Answer key

T1S4

### Perimeter of a Rectangle


Find the perimeter of each rectangle.

1)



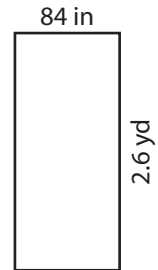
Perimeter = 8

2)




Perimeter = 355.2 in


3)



4)



Perimeter = 76




Perimeter = 106 ft

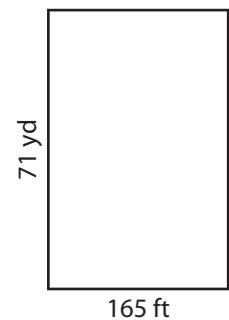
7)



Perimeter = 58 in



Perimeter = 50.6 yd



Perimeter = 252 yd

**PREVIEW**

Gain complete access to the largest collection of worksheets in all subjects!

Members, please log in to download this worksheet.

Not a member? Please sign up to gain complete access.

[www.mathworksheets4kids.com](http://www.mathworksheets4kids.com)