

Name : _____

T1S5

Perimeter of a Rectangle

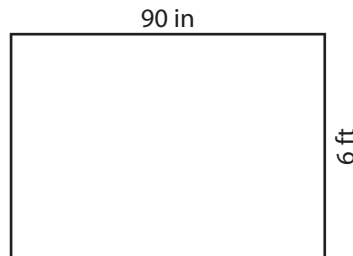
Find the perimeter of each rectangle.

1)



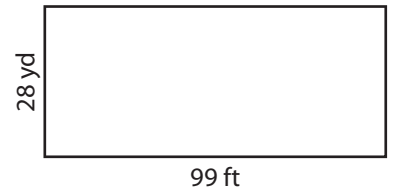
Perimeter = _____

2)




Perimeter = _____ yd

3)



4)




Perimeter = _____

PREVIEW
Gain complete access to the largest collection of worksheets in all subjects!

Members, please log in to download this worksheet.

Not a member? Please sign up to gain complete access.

www.mathworksheets4kids.com




Perimeter = _____ yd

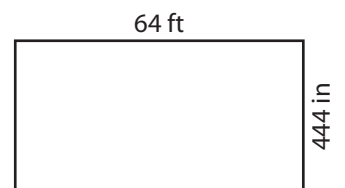
7)



Perimeter = _____ yd



Perimeter = _____ yd



Perimeter = _____ ft

Name : _____

Answer key

T1S5

Perimeter of a Rectangle

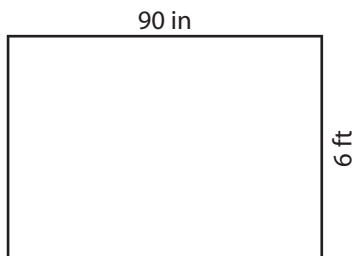
Find the perimeter of each rectangle.

1)



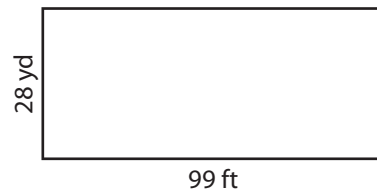
Perimeter = 207.2

2)




Perimeter = 122 yd

3)



4)



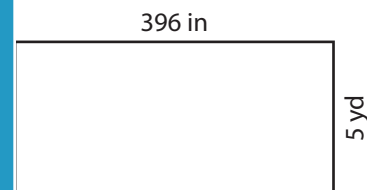
Perimeter = 114.4

Gain complete access to the largest collection of worksheets in all subjects!

Members, please log in to download this worksheet.

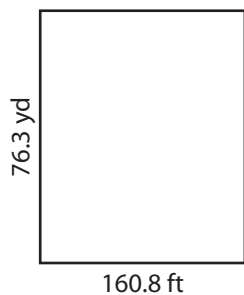
Not a member? Please sign up to gain complete access.

www.mathworksheets4kids.com



Perimeter = 32 yd

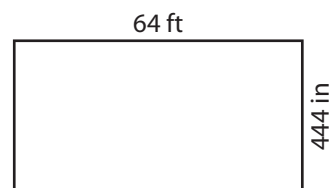
7)



Perimeter = 259.8 yd



Perimeter = 76 yd



Perimeter = 202 ft