

Name : _____

Perimeter of a Rectangle

A) Find the perimeter of each rectangle for the given measurements.

1) width = 102.3 ft, length = 52.7 yd

Perimeter = _____ yd

2) length = 96 in, width = 1.5 yd

Perimeter = _____ in

3) length = 387.6 in, width = 14.5 ft

4) width = 720 in, length = 57 yd

Perimeter = _____ yd

B) Find the perimeter

5)



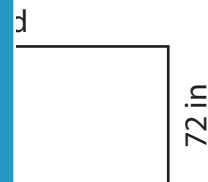
Perimeter = _____

Gain complete access to the largest collection of worksheets in all subjects!

Members, please log in to download this worksheet.

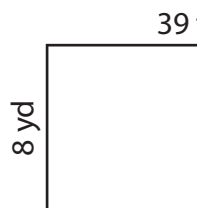
Not a member? Please sign up to gain complete access.

www.mathworksheets4kids.com




Perimeter = _____ yd

7)



Perimeter = _____ ft



Perimeter = _____ yd

9) What is the perimeter of the rectangle, if the width and the length are 3.7 feet and 2 yards respectively?

_____ feet

Name : _____

Answer key

T2S2

Perimeter of a Rectangle

A) Find the perimeter of each rectangle for the given measurements.

1) width = 102.3 ft, length = 52.7 yd

Perimeter = 173.6 yd

2) length = 96 in, width = 1.5 yd

Perimeter = 300 in

3) length = 387.6 in, width = 14.5 ft

4) width = 720 in, length = 57 yd

Perimeter = 154 yd

B) Find the perimeter

5)



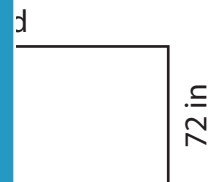
Perimeter = _____

Gain complete access to the largest collection of worksheets in all subjects!

Members, please log in to download this worksheet.

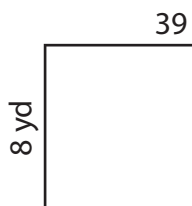
Not a member? Please sign up to gain complete access.

www.mathworksheets4kids.com

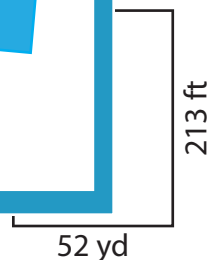


Perimeter = 24 yd

7)



Perimeter = 126 ft



Perimeter = 246 yd

9) What is the perimeter of the rectangle, if the width and the length are 3.7 feet and 2 yards respectively?

19.4 feet