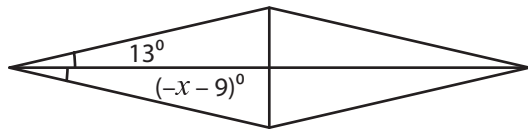


Rhombus - Angles

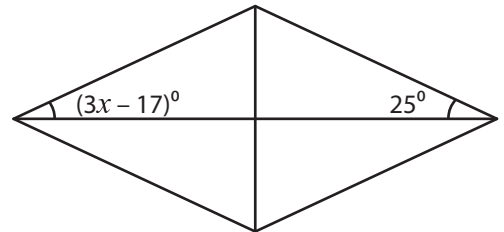
Find the value of x in each rhombus.

1)



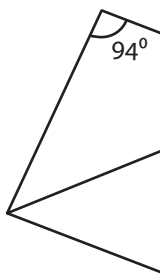
$x =$ _____

2)

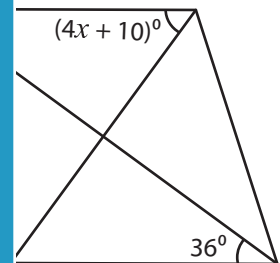


$x =$ _____

3)




$x =$ _____

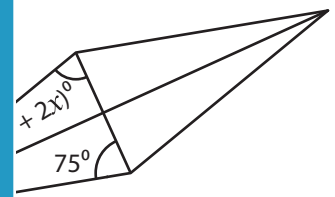


$x =$ _____

5)

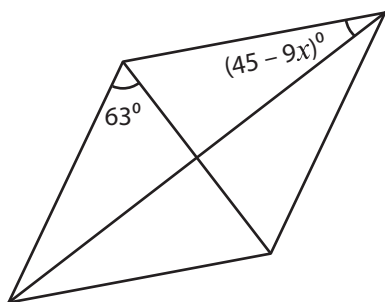


$x =$ _____



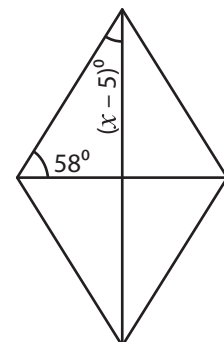
$x =$ _____

7)



$x =$ _____

8)



$x =$ _____

PREVIEW

Gain complete access to the largest collection of worksheets in all subjects!

Members, please log in to download this worksheet.

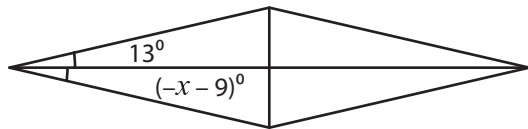
Not a member? Please sign up to gain complete access.

www.mathworksheets4kids.com

Rhombus - Angles

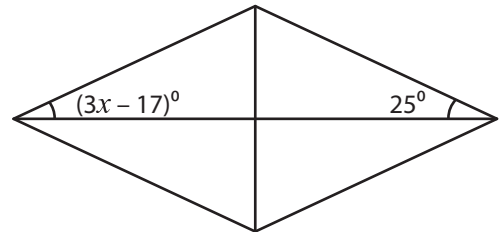
Find the value of x in each rhombus.

1)



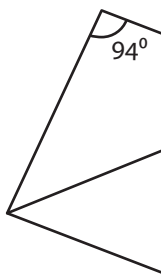
$x = \underline{\quad -22 \quad}$

2)

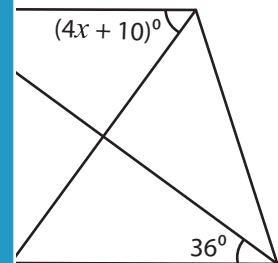


$x = \underline{\quad 14 \quad}$

3)




$x = \underline{\quad \quad}$

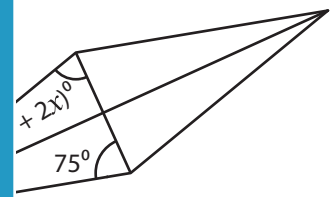


$x = \underline{\quad 11 \quad}$

5)

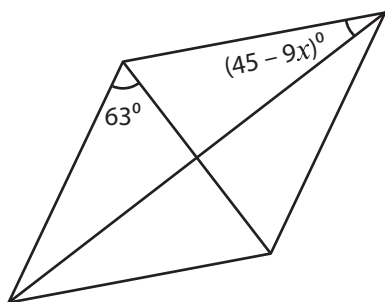


$x = \underline{\quad \quad}$



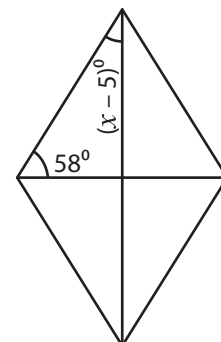
$x = \underline{\quad 33 \quad}$

7)



$x = \underline{\quad 2 \quad}$

8)



$x = \underline{\quad 37 \quad}$

PREVIEW

Gain complete access to the largest collection of worksheets in all subjects!

Members, please log in to download this worksheet.

Not a member? Please sign up to gain complete access.

www.mathworksheets4kids.com