

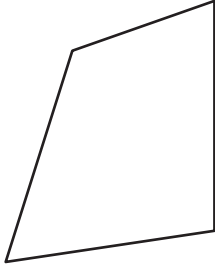
Name : \_\_\_\_\_

# Rhombus


Sheet 2

State whether each quadrilateral is a rhombus.

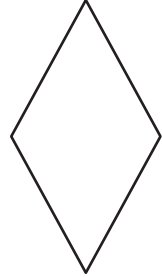
1)



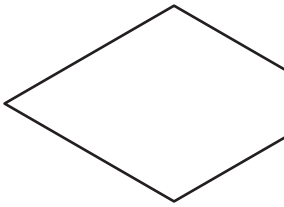
2)



3)



4)




**PREVIEW**

Gain complete access to the largest collection of worksheets in all subjects!

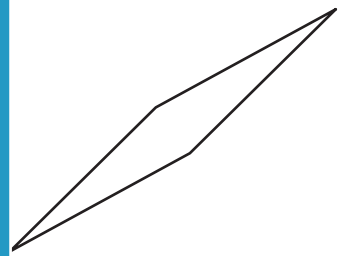

Members, please log in to download this worksheet.

Not a member? Please sign up to gain complete access.

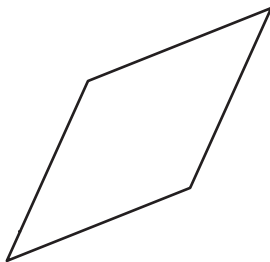
[www.mathworksheets4kids.com](http://www.mathworksheets4kids.com)



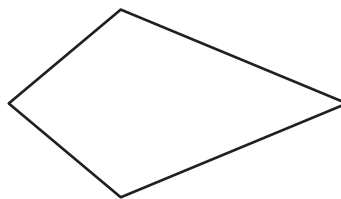
7)



10)



11)



12)

