

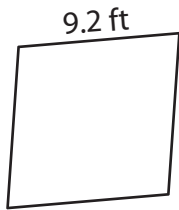
Name : _____

Perimeter of a Rhombus

Sheet 1


Find the perimeter of each rhombus.

1)



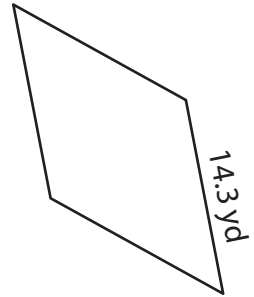
Perimeter = _____

2)

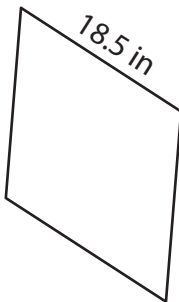


Perimeter = _____

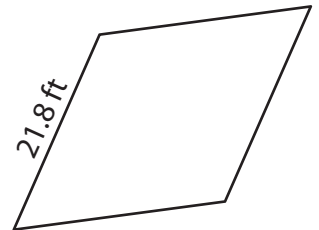
3)



4)



Perimeter = _____



Perimeter = _____

7) The side of a rhombus m

rhombus.

8) The side length of a rhombus is 16.6 inches. Determine its perimeter.

PREVIEW

Gain complete access to the largest collection of worksheets in all subjects!

Members, please log in to download this worksheet.

Not a member? Please sign up to gain complete access.

www.mathworksheets4kids.com

Name : _____

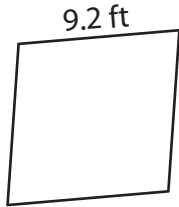
Answer key

Perimeter of a Rhombus

Sheet 1


Find the perimeter of each rhombus.

1)



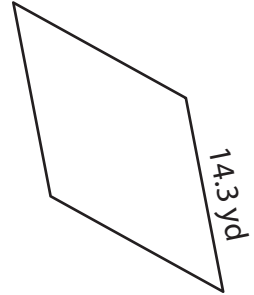
Perimeter = 36.8 ft

2)

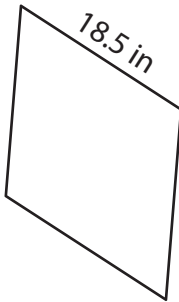


Perimeter = 57.2 yd

3)



4)



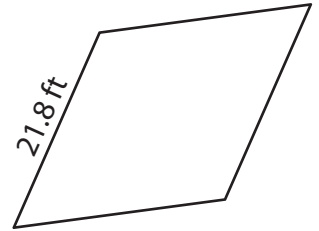
Perimeter = 74 in

PREVIEW
Gain complete access to the largest collection of worksheets in all subjects!

Members, please log in to download this worksheet.

Not a member? Please sign up to gain complete access.

www.mathworksheets4kids.com



Perimeter = 87.2 ft

7) The side of a rhombus m

rhombus.

35.6 feet

8) The side length of a rhombus is 16.6 inches. Determine its perimeter.

66.4 inches