

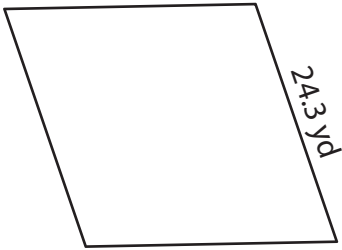
Name : _____

Perimeter of a Rhombus

Sheet 2

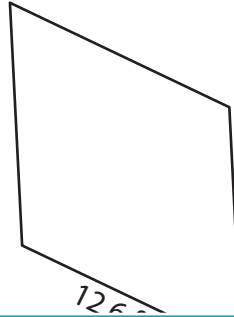
Find the perimeter of each rhombus.

1)



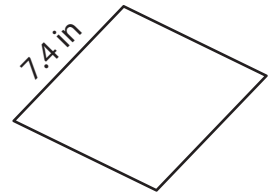
Perimeter = _____

2)

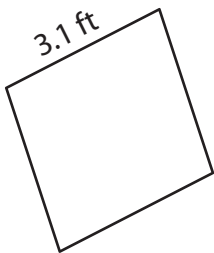


Perimeter = _____

3)



4)



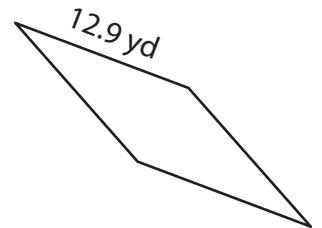
Perimeter = _____

PREVIEW
Gain complete access to the largest
collection of worksheets in all subjects!

Members, please
log in to
download this
worksheet.

Not a member?
Please sign up to
gain complete
access.

www.mathworksheets4kids.com



Perimeter = _____

7) The length of the side of

8) The side of a rhombus measures 5.2 feet. What is the perimeter of the rhombus?

Name : _____

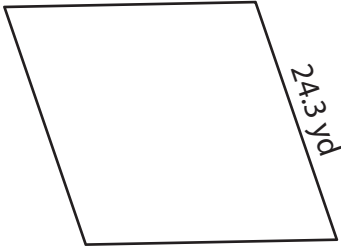
Answer key

Perimeter of a Rhombus

Sheet 2

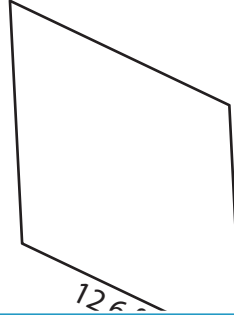
Find the perimeter of each rhombus.

1)



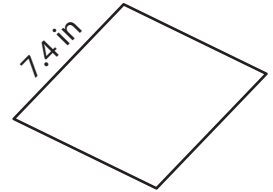
Perimeter = 97.2 yd

2)

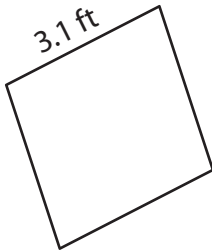


Perimeter = 29.6 in

3)



4)



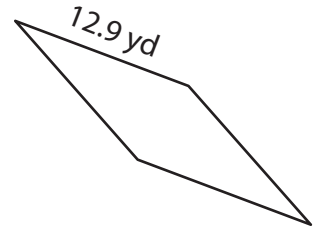
Perimeter = 12.4 ft

Gain complete access to the largest collection of worksheets in all subjects!

Members, please log in to download this worksheet.

Not a member? Please sign up to gain complete access.

www.mathworksheets4kids.com



Perimeter = 51.6 yd

7) The length of the side of

82 yards

8) The side of a rhombus measures 5.2 feet. What is the perimeter of the rhombus?

20.8 feet