

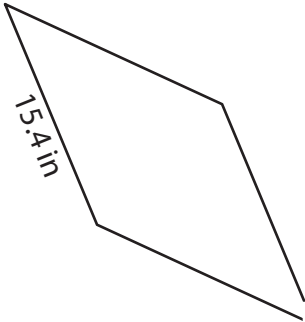
Name : _____

Perimeter of a Rhombus

Sheet 3

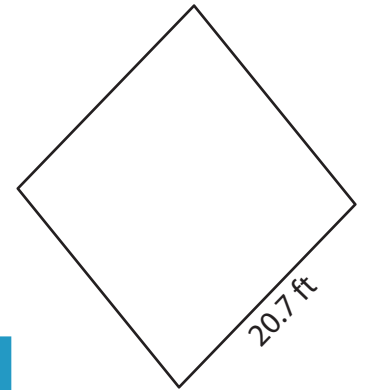
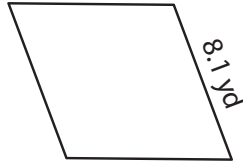
Find the perimeter of each rhombus.

1)



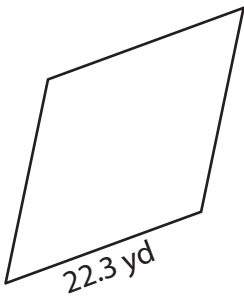
Perimeter = _____

2)

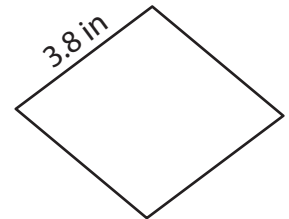


Perimeter = _____

4)



Perimeter = _____



Perimeter = _____

7) What is the perimeter of

8) Determine the perimeter of the rhombus, if its side length is 24.1 yards.

PREVIEW

Gain complete access to the largest collection of worksheets in all subjects!

Members, please log in to download this worksheet.

Not a member? Please sign up to gain complete access.

www.mathworksheets4kids.com

Name : _____

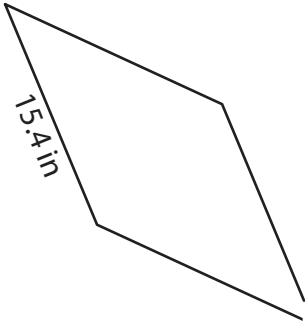
Answer key

Sheet 3

Perimeter of a Rhombus

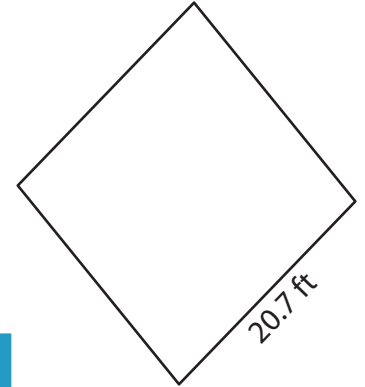
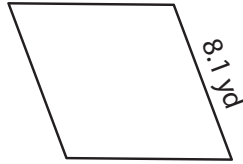
Find the perimeter of each rhombus.

1)



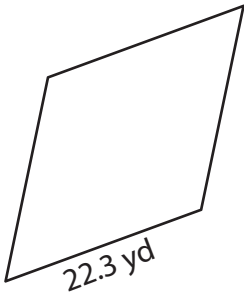
Perimeter = 61.6 in

2)

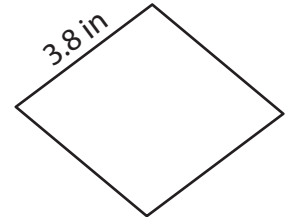


Perimeter = 82.8 ft

4)



Perimeter = 89.2 yd



Perimeter = 15.2 in

PREVIEW

Gain complete access to the largest collection of worksheets in all subjects!

Members, please log in to download this worksheet.

Not a member? Please sign up to gain complete access.

www.mathworksheets4kids.com

7) What is the perimeter of

70.4 inches

8) Determine the perimeter of the rhombus, if its side length is 24.1 yards.

96.4 yards