

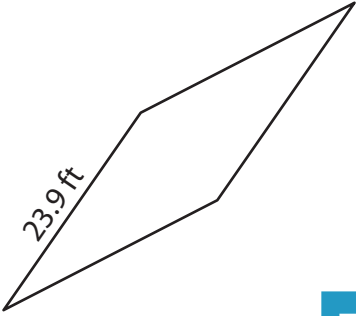
Name : _____

Perimeter of a Rhombus

Sheet 4

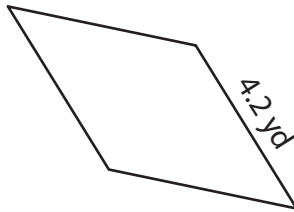
Find the perimeter of each rhombus.

1)



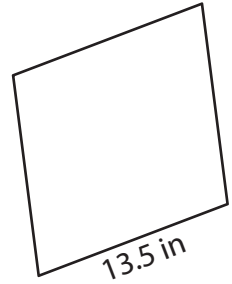
Perimeter = _____

2)

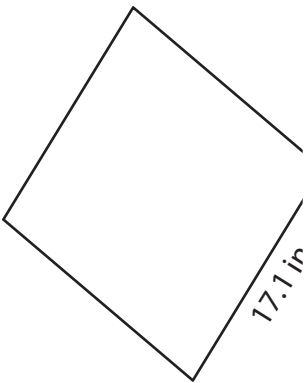


Perimeter = _____

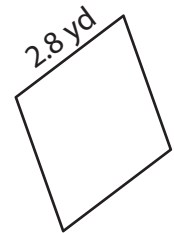
3)



4)



Perimeter = _____



Perimeter = _____

7) Determine the perimeter

8) If the side length of a rhombus is 21.3 inches, calculate the perimeter of the rhombus.

PREVIEW

Gain complete access to the largest collection of worksheets in all subjects!

Members, please log in to download this worksheet.

Not a member? Please sign up to gain complete access.

www.mathworksheets4kids.com

Name : _____

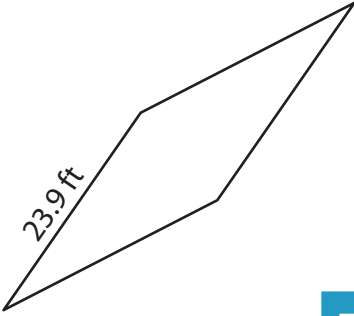
Answer key

Sheet 4

Perimeter of a Rhombus

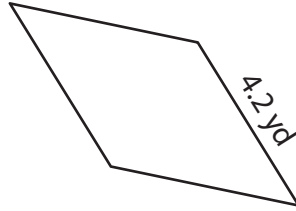
Find the perimeter of each rhombus.

1)



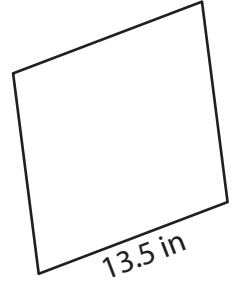
Perimeter = 95.6 ft

2)

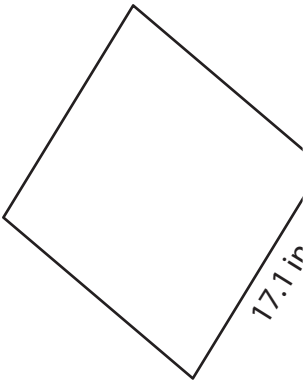


Perimeter = 54 in

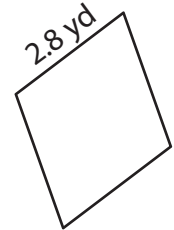
3)



4)



Perimeter = 68.4 in



Perimeter = 11.2 yd

7) Determine the perimeter

22 yards

8) If the side length of a rhombus is 21.3 inches, calculate the perimeter of the rhombus.

85.2 inches

PREVIEW

Gain complete access to the largest collection of worksheets in all subjects!

Members, please log in to download this worksheet.

Not a member? Please sign up to gain complete access.

www.mathworksheets4kids.com