

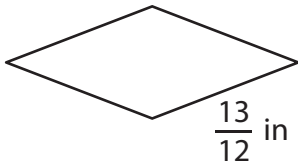
Name : _____

Perimeter of a Rhombus

Sheet 1

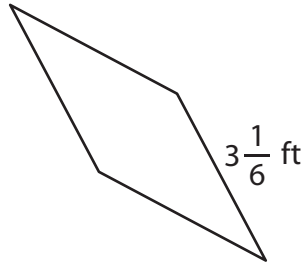
Find the perimeter of each rhombus.

1)



Perimeter = _____

2)



3)



Perimeter = _____

4)



Perimeter = _____

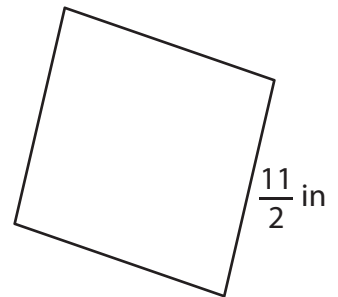
PREVIEW

Gain complete access to the largest collection of worksheets in all subjects!

Members, please log in to download this worksheet.

Not a member? Please sign up to gain complete access.

www.mathworksheets4kids.com



Perimeter = _____

7) The side of a rhombus m

rhombus?

8) The side length of a rhombus is $\frac{1}{7}$ inch. Determine its perimeter.

Name : _____

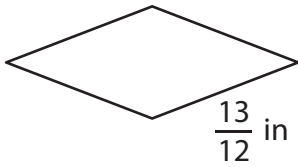
Answer key

Perimeter of a Rhombus

Sheet 1

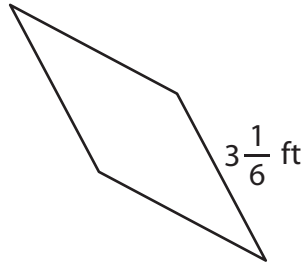
Find the perimeter of each rhombus.

1)



Perimeter = $\frac{13}{3}$ or $4\frac{1}{3}$

2)



3)



Perimeter = $\frac{5}{2}$ or $2\frac{1}{2}$ yd

4)



Perimeter = **11 ft**

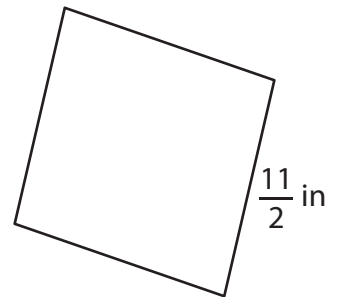
PREVIEW

Gain complete access to the largest collection of worksheets in all subjects!

Members, please log in to download this worksheet.

Not a member? Please sign up to gain complete access.

www.mathworksheets4kids.com



Perimeter = **22 in**

7) The side of a rhombus is $32\frac{1}{5}$ yards.

Perimeter = _____

$\frac{128}{5}$ or $25\frac{3}{5}$ yards

8) The side length of a rhombus is $\frac{1}{7}$ inch. Determine its perimeter.

$\frac{4}{7}$ inch