

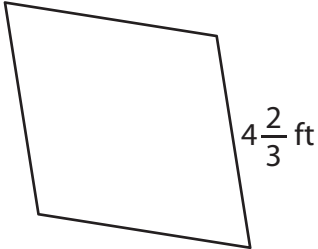
Name : _____

Perimeter of a Rhombus

Sheet 2

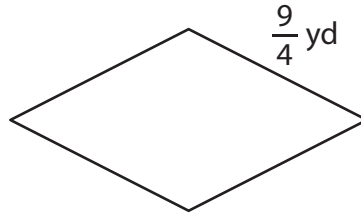
Find the perimeter of each rhombus.

1)



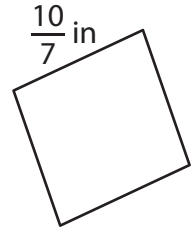
Perimeter = _____

2)

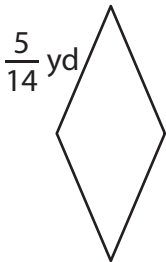


Perimeter = _____

3)



4)



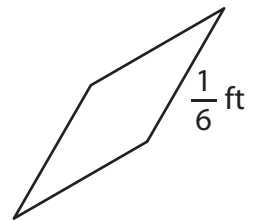
Perimeter = _____

PREVIEW
Gain complete access to the largest collection of worksheets in all subjects!

Members, please log in to download this worksheet.

Not a member? Please sign up to gain complete access.

www.mathworksheets4kids.com



Perimeter = _____

7) The length of the side of

8) Determine the perimeter of the rhombus, if its side length is $7\frac{1}{2}$ feet.

Name : _____

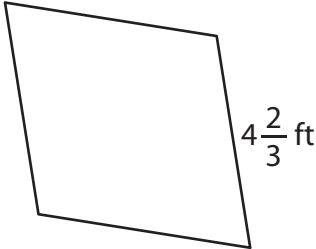
Answer key

Perimeter of a Rhombus

Sheet 2

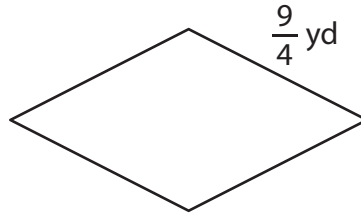
Find the perimeter of each rhombus.

1)



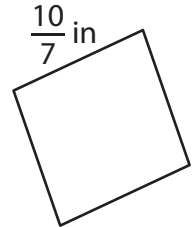
Perimeter = $\frac{56}{3}$ or 18

2)

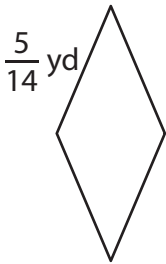


Perimeter = $\frac{40}{7}$ or $5\frac{5}{7}$ in

3)



4)



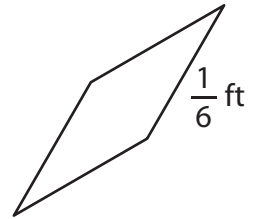
Perimeter = $\frac{10}{7}$ or $1\frac{3}{7}$

Gain complete access to the largest collection of worksheets in all subjects!

Members, please log in to download this worksheet.

Not a member? Please sign up to gain complete access.

www.mathworksheets4kids.com



Perimeter = $\frac{2}{3}$ ft

7) The length of the side of

$\frac{48}{5}$ or $9\frac{3}{5}$ inches

8) Determine the perimeter of the rhombus, if its side length is $7\frac{1}{2}$ feet.

30 feet