

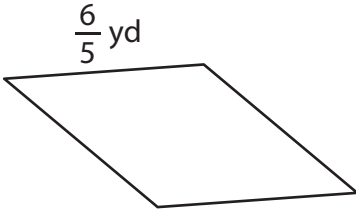
Name : \_\_\_\_\_

## Perimeter of a Rhombus

Sheet 3

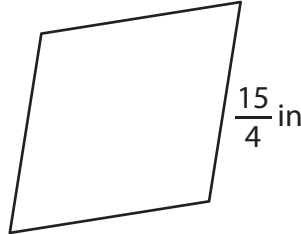
Find the perimeter of each rhombus.

1)



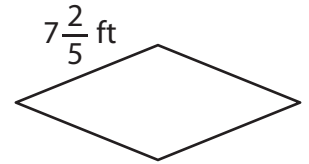
Perimeter = \_\_\_\_\_

2)

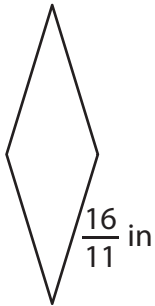


Perimeter = \_\_\_\_\_

3)



4)



Perimeter = \_\_\_\_\_

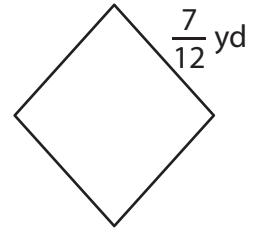
**PREVIEW**

Gain complete access to the largest collection of worksheets in all subjects!

Members, please log in to download this worksheet.

Not a member? Please sign up to gain complete access.

[www.mathworksheets4kids.com](http://www.mathworksheets4kids.com)



Perimeter = \_\_\_\_\_

7) If the side length of a rhombus is \_\_\_\_\_

Perimeter = \_\_\_\_\_

8) Find the perimeter of the rhombus, if its side is  $1\frac{5}{6}$  yards long.

\_\_\_\_\_

Name : \_\_\_\_\_

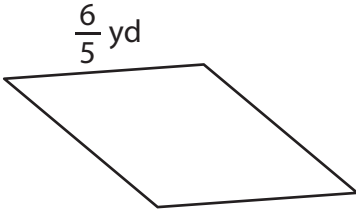
## Answer key

### Perimeter of a Rhombus

Sheet 3

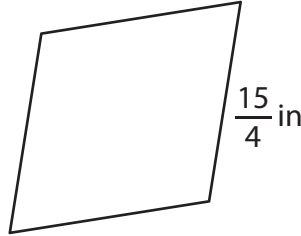
Find the perimeter of each rhombus.

1)

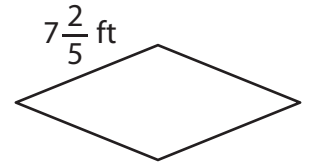


Perimeter =  $\frac{24}{5}$  or  $4\frac{4}{5}$

2)

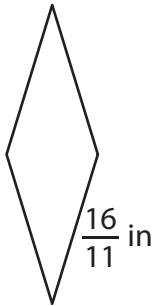


3)



Perimeter =  $\frac{148}{5}$  or  $29\frac{3}{5}$  ft

4)



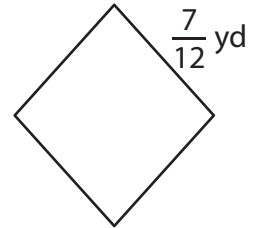
Perimeter =  $\frac{64}{11}$  or  $5\frac{9}{11}$

**PREVIEW**  
Gain complete access to the largest collection of worksheets in all subjects!

Members, please log in to download this worksheet.

Not a member? Please sign up to gain complete access.

[www.mathworksheets4kids.com](http://www.mathworksheets4kids.com)



Perimeter =  $\frac{7}{3}$  or  $2\frac{1}{3}$  yd

7) If the side length of a rhombus is  $\frac{4}{9}$  foot

Perimeter =

$\frac{4}{9}$  foot

8) Find the perimeter of the rhombus, if its side is  $1\frac{5}{6}$  yards long.

$\frac{22}{3}$  or  $7\frac{1}{3}$  yards