

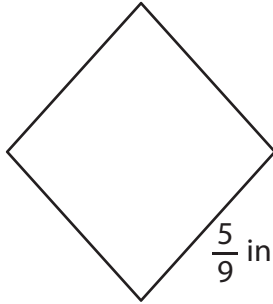
Name : _____

Perimeter of a Rhombus

Sheet 4

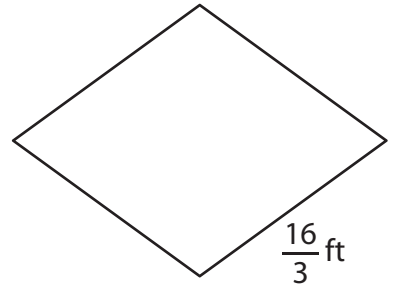
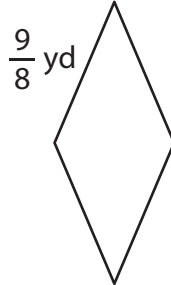
Find the perimeter of each rhombus.

1)



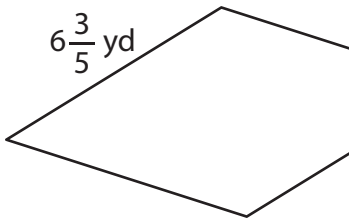
Perimeter = _____

2)

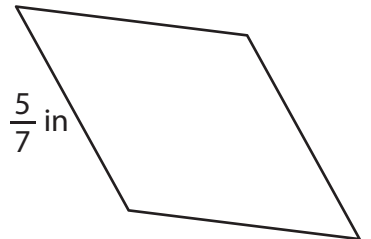


Perimeter = _____

4)



Perimeter = _____



Perimeter = _____

7) The side of a rhombus m

rhombus.

PREVIEW

Gain complete access to the largest collection of worksheets in all subjects!

Members, please log in to download this worksheet.

Not a member? Please sign up to gain complete access.

www.mathworksheets4kids.com

8) If the length of the side of a rhombus is $\frac{7}{2}$ inches, determine the perimeter of the rhombus.

Name : _____

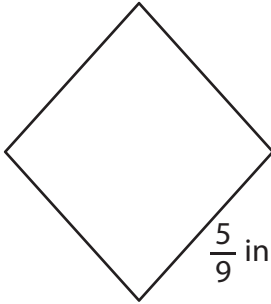
Answer key

Perimeter of a Rhombus

Sheet 4

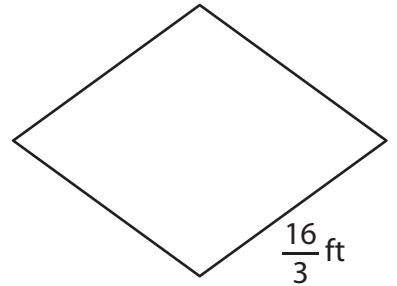
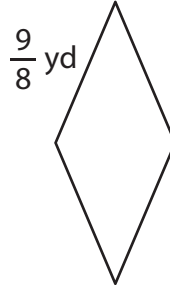
Find the perimeter of each rhombus.

1)



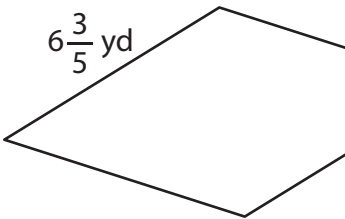
Perimeter = $\frac{20}{9}$ or $2\frac{2}{9}$

2)



Perimeter = $\frac{64}{3}$ or $21\frac{1}{3}$ ft

4)



Perimeter = $\frac{132}{5}$ or $26\frac{2}{5}$

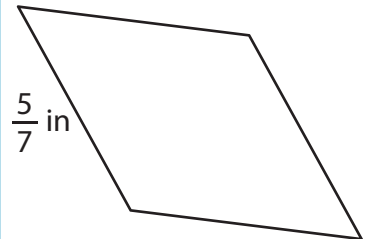
PREVIEW

Gain complete access to the largest collection of worksheets in all subjects!

Members, please log in to download this worksheet.

Not a member? Please sign up to gain complete access.

www.mathworksheets4kids.com



Perimeter = $\frac{20}{7}$ or $2\frac{6}{7}$ in

7) The side of a rhombus is $10\frac{2}{7}$ feet

rhombus.

$\frac{72}{7}$ or $10\frac{2}{7}$ feet

8) If the length of the side of a rhombus is $\frac{7}{2}$ inches, determine the perimeter of the rhombus.

14 inches