

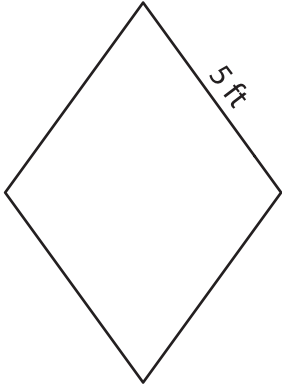
Name : \_\_\_\_\_

## Perimeter of a Rhombus

L1S1

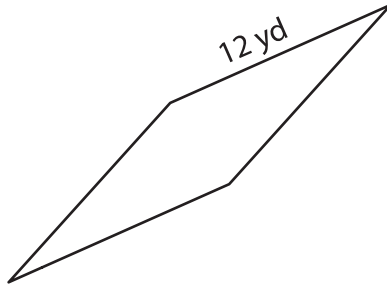
Find the perimeter of each rhombus.

1)



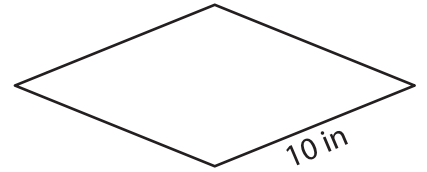
Perimeter = \_\_\_\_\_

2)



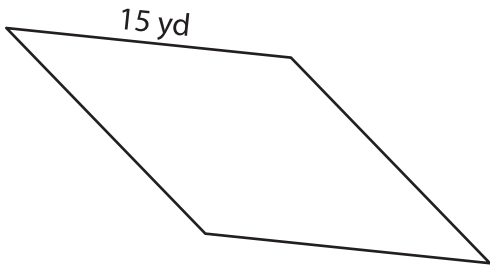
Perimeter = \_\_\_\_\_

3)



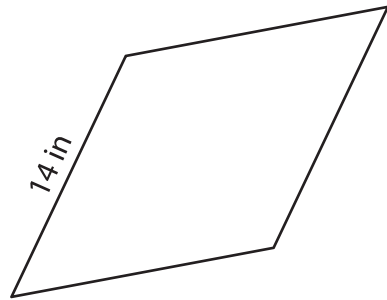
Perimeter = \_\_\_\_\_

4)



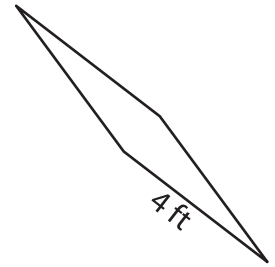
Perimeter = \_\_\_\_\_

5)



Perimeter = \_\_\_\_\_

6)



Perimeter = \_\_\_\_\_

7) Find the perimeter of the rhombus, if its side is 18 feet long.

\_\_\_\_\_

8) Determine the perimeter of the rhombus whose side length is 9 yards.

\_\_\_\_\_