

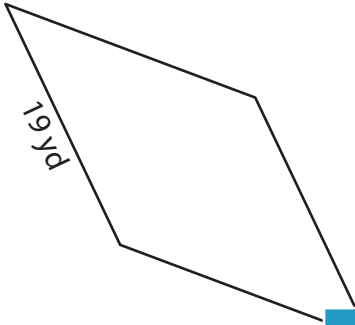
Name : _____

Perimeter of a Rhombus

L1S2

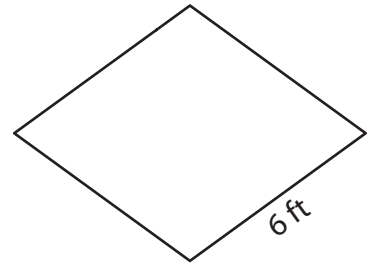

Find the perimeter of each rhombus.

1)



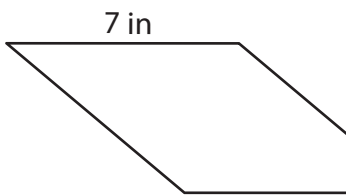
Perimeter = _____

2)

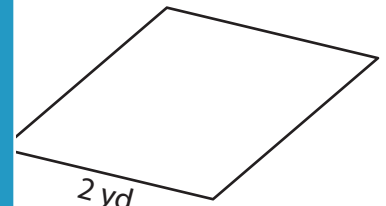


Perimeter = _____

4)



Perimeter = _____



Perimeter = _____

7) If the side length of a rhombus is 5 cm, what is its perimeter?

Perimeter = _____

8) The side of a rhombus measures 8 inches. What is the perimeter of the rhombus?

PREVIEW

Gain complete access to the largest collection of worksheets in all subjects!

Members, please log in to download this worksheet.

Not a member? Please sign up to gain complete access.

www.mathworksheets4kids.com

Name : _____

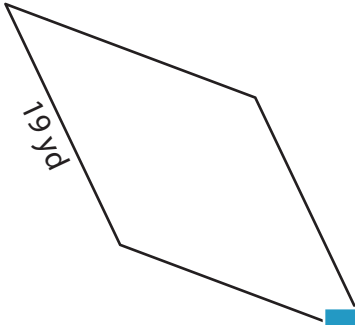
Answer key

L1S2

Perimeter of a Rhombus

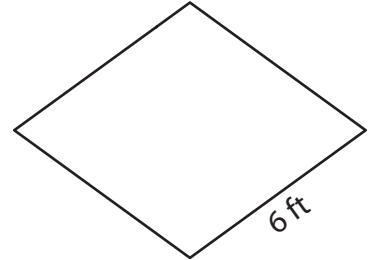
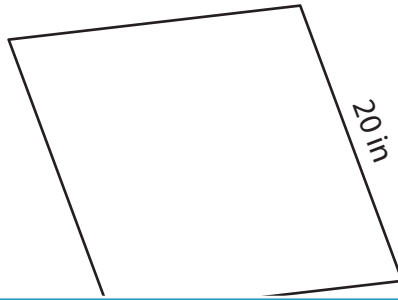
Find the perimeter of each rhombus.

1)



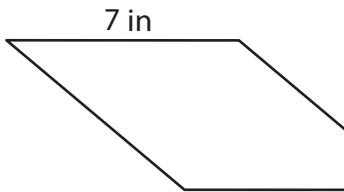
Perimeter = 76 yd

2)

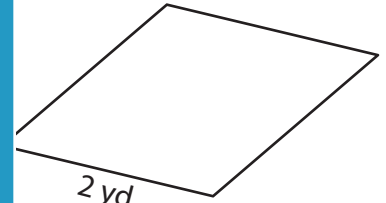


Perimeter = 24 ft

4)



Perimeter = 28 in



Perimeter = 8 yd

7) If the side length of a rhombus is 11 yards, what is the perimeter?

rhombus.

44 yards

8) The side of a rhombus measures 8 inches. What is the perimeter of the rhombus?

32 inches

PREVIEW

Gain complete access to the largest collection of worksheets in all subjects!

Members, please log in to download this worksheet.

Not a member? Please sign up to gain complete access.

www.mathworksheets4kids.com