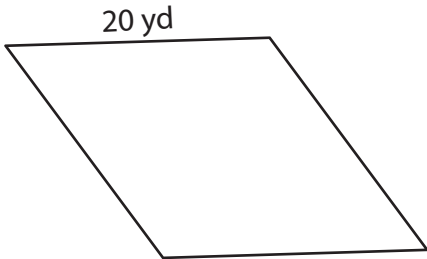


Name : _____

Perimeter of a Rhombus

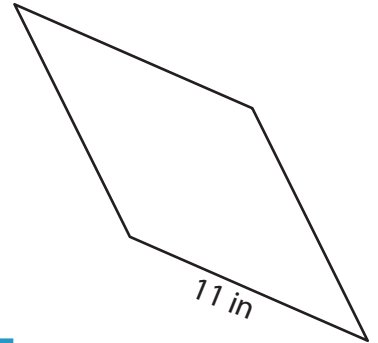
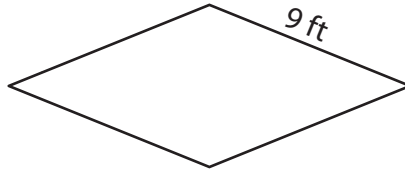
Find the perimeter of each rhombus.

1)



Perimeter = _____

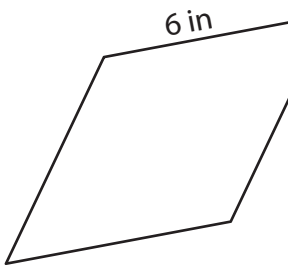
2)



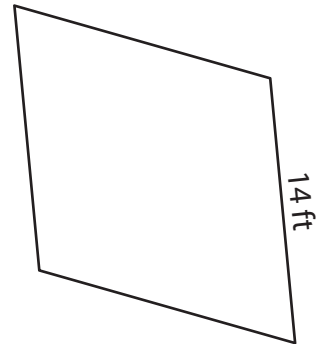
3)

Perimeter = _____

4)



Perimeter = _____



Perimeter = _____

7) Determine the perimeter

8) The length of the side of a rhombus is 1 inch. Find its perimeter.

PREVIEW

Gain complete access to the largest collection of worksheets in all subjects!

Members, please log in to download this worksheet.

Not a member? Please sign up to gain complete access.

www.mathworksheets4kids.com

Name : _____

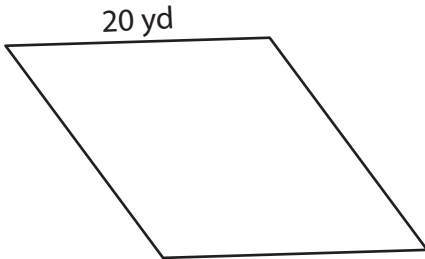
Answer key

Perimeter of a Rhombus

L1S4

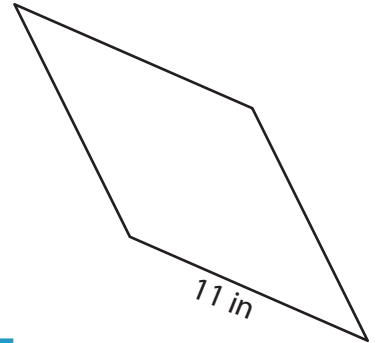
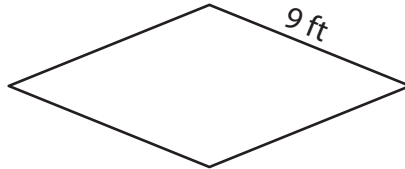
Find the perimeter of each rhombus.

1)



Perimeter = 80 yd

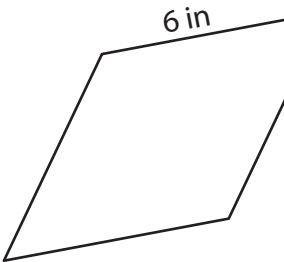
2)



3)

Perimeter = 44 in

4)



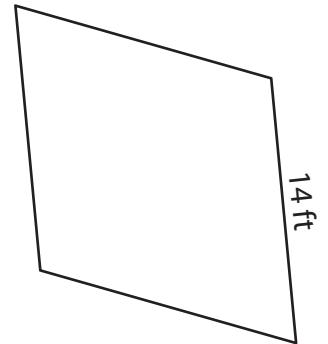
Perimeter = 24 in

Gain complete access to the largest collection of worksheets in all subjects!

Members, please log in to download this worksheet.

Not a member? Please sign up to gain complete access.

www.mathworksheets4kids.com



Perimeter = 56 ft

7) Determine the perimeter

60 feet

8) The length of the side of a rhombus is 1 inch. Find its perimeter.

4 inches